



I. Choose the best answer: (5X1=5)

1. A vertex is a _____.
a) Curve b) Corner c) line d) Circle
2. Patterns are also known as _____.
a) Sequence b) Square c) Point d) Zero
3. Complete the pattern: 2,20,200, _____.
a) 202 b) 2000 c) 2002 d) 22
4. Area is written in _____ units.
a) Polygon b) Circle c) Square d) Pentagon
5. The length of the boundary of a polygon is called the _____.
a) Triangle b) point c) Rectangle d) Perimeter


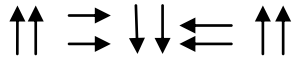
II. Fill in the blanks: (3X1=3)

1. The total space occupied in a closed surface is termed as _____
2. Edges are the lines that join to form _____
3. Complete the pattern: 7, 14, 21, _____

III. Match the following: (4X1=4)

1. Square - 3 sides
2. Triangle - 4 Corners
3. 7A, 6B, 5C - 6cm
4.  1 cm  1 cm - 4D, 3E
2 cm Perimeter?

IV. Answer the following: (4X2=8)

1. Continue the pattern:
a)  _____
b) 100, 90, 80, _____, _____
c) 22, 33, 44, _____, _____
d)  _____, _____