

I. Calculate the perimeter and Area.

(2 X 5=10)

1.



length = 7 cm
breadth = 3 cm

2.

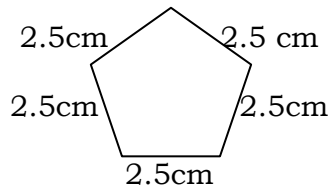


side – 3.5 cm

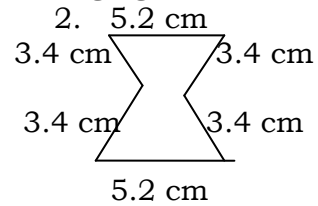
II. Find the Perimeter of the following figures:

(2 X 3 =6)

1.




2.



III. Find the area of the coloured patches. Each side measures 1 cm

1.



2.

(2X2=4)

