




$$2 + 4 = \square$$




$$3 + 6 = \square$$




$$2 + 5 = \square$$



$$5 + 5 = \square$$



$$6 + 2 = \square$$



$$1 + 5 = \square$$