

07.01.2020
STD-III

EVERWIN VIDHYASHRAM
Maths – TT

20 Marks

I. Draw hands on the clocks to show the time:


(4X3=12)

1. 9.45
2. 2' O Clock
3. 6.15
4. 10.30


II. Write the time in two ways:

(4X2=8)


1.



2.



3.



4.

