



EVERWIN VIDHYASHRAM

23.01.2020

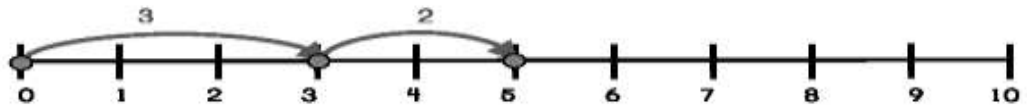
TRY AT HOME

UKG

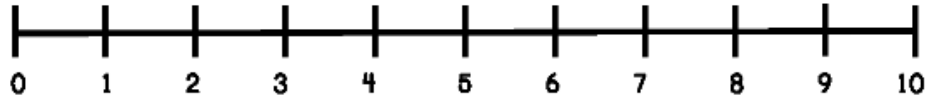
Math : (Refer Practise Note)

Simple addition using Number Line

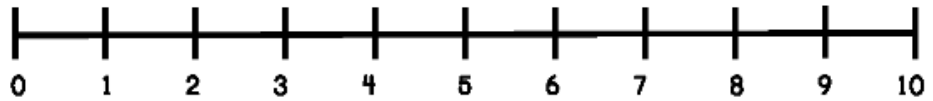
$$\begin{array}{r} + 3 \\ 2 \\ \hline 5 \end{array}$$



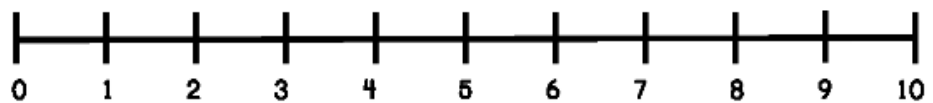
$2 + 5 = \square$



$6 + 3 = \square$



$5 + 5 = \square$



SIMPLE ADDITION USING STICKS

Sample sum

3 |||

4

5

6

+ 2 || +



5



+ 3



+ 1

5

Count and write the number of pictures and add them

$\begin{array}{r} + 2 \\ 3 \\ \hline \square \end{array}$	
	

$\begin{array}{r} + 1 \\ 3 \\ \hline \square \end{array}$	
	

$\begin{array}{r} + 2 \\ 4 \\ \hline \square \end{array}$	
	

$\begin{array}{r} + 1 \\ 4 \\ \hline \square \end{array}$	