

A decorative border of ice cream cones surrounds the page. The cones are arranged in a rectangular frame, with each cone having a yellow top, a pink middle, and a brown bottom. The text is centered within this frame.

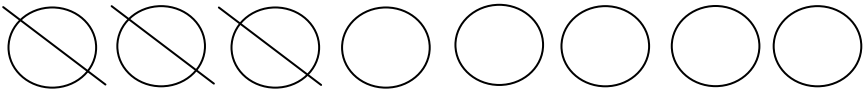
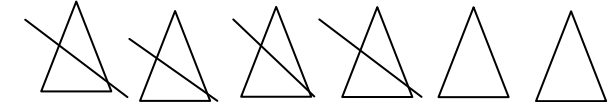
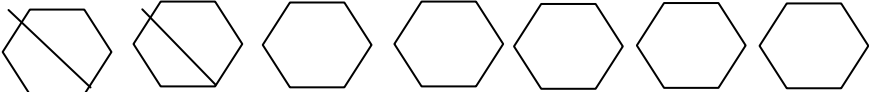
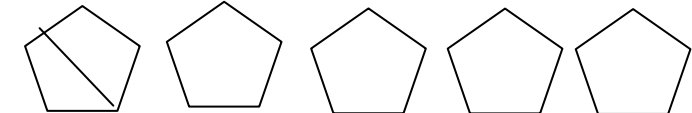

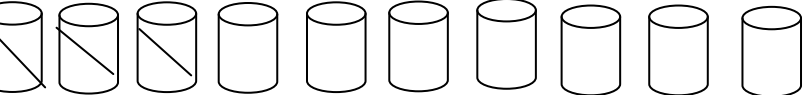
EVERWIN VIDHYASHRAM

24.02.2020

TRY AT HOME

UKG

Math : Refer Practise Note

$8 - 3 = 5$	
$\underline{\quad} - \underline{\quad} = \underline{\quad}$	
$\underline{\quad} - \underline{\quad} = \underline{\quad}$	
$\underline{\quad} - \underline{\quad} = \underline{\quad}$	
$\underline{\quad} - \underline{\quad} = \underline{\quad}$	
$\underline{\quad} - \underline{\quad} = \underline{\quad}$	

SUBTRACTION

$$\begin{array}{r} 5 \\ - 2 \\ \hline \square \end{array}$$

$$\begin{array}{r} 9 \\ - 3 \\ \hline \square \end{array}$$

$$\begin{array}{r} 7 \\ - 7 \\ \hline \square \end{array}$$

$$\begin{array}{r} 4 \\ - 1 \\ \hline \square \end{array}$$

$$\begin{array}{r} 8 \\ - 2 \\ \hline \square \end{array}$$

$$\begin{array}{r} 6 \\ - 5 \\ \hline \square \end{array}$$