

EVERWIN VIDHYASHRAM


12.07.2019

TRY AT HOME

UKG

MATH : Refer the worksheet given

Number the pictures in Ascending order

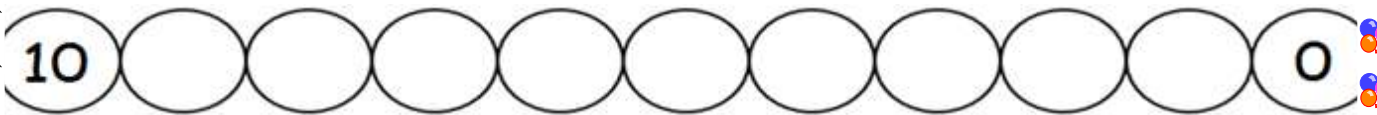


Write the Ascending Order

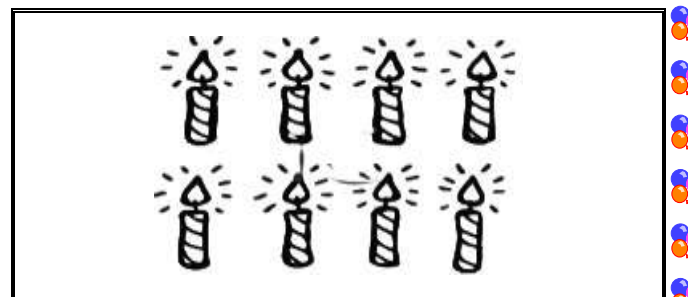
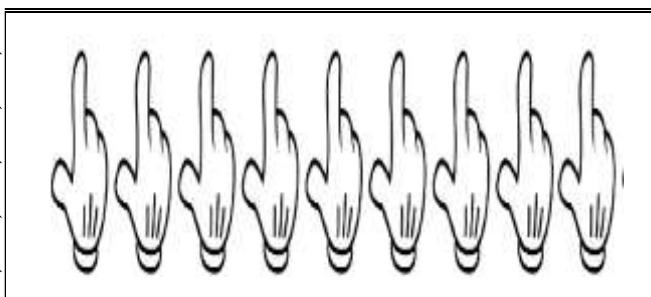
13	16	19	10	11

6	12	20	18	3

Backward Counting - Write the Missing Numbers



Count and Write the Number Names



Write the Number Names

3

7

Write the following

After Numbers

28

--

19

--

Before Numbers

45

--

30

--

Between Numbers

22

--

24

15

--

17