

19.03.2020

NAME : _____

LKG - _____

MATH WRITTEN

40 MARKS

I. Write the numerals

9 x 1 = 9

31									
----	--	--	--	--	--	--	--	--	--

II. Write the Number names for


2 x 3 = 6


3	_____

5	_____

III. Count and write the Number names

2 x 4 = 8

	_____

	_____

IV. Write the numbers in ascending order

5 x 1 = 5

3	5	1	4	2
---	---	---	---	---

--	--	--	--	--

V. Write the following

3 x 1 = 3


After Number	
9	


Between Number		
6		8


Before Number	
	5


VI. Count and circle the correct number

4 x 1 = 4

		
5	3	4



		
2	3	4

		
5	3	4

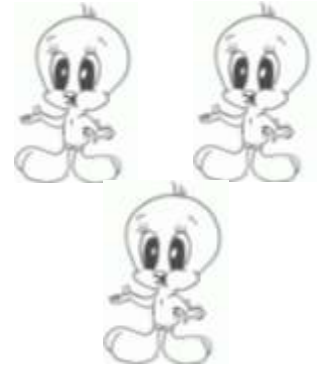

		
9	6	8

VII. Match the following

5 x 1 = 5



three



5