

I. Multiple choice questions: 5x1=5

- _____ is a series of numbers found by adding a previous numbers.
 - Fibonaccis sequence
 - Triangular numbers
 - Magic square
 - Square numbers
- Special words which read the same both ways are called _____.
 - Fibonaccis
 - Palindrome
 - Square
 - Magic
- _____ is a set of numbers that help to measure an object.
 - Graph
 - Scale
 - Cm
 - Line chart
- Tally marks are _____ numeral system.
 - Palindrome
 - Unary
 - Statistical
 - Pie chart
- Volume of a tank is measured in _____ m.
 - mm
 - Centri
 - Deci
 - Cubic

II. Match the following: 5x1=5

- | | | |
|-------------------|---|------------------|
| 6. Height | - | Cubic mm |
| 7. Special number | - | Rectangular bars |
| 8. | - | 494 |
| 9. Sugar crystal | - | 7 |
| 10. Bar graph | - | Attitude |


III. Solve the following: 3x2=6

11. In a survey,

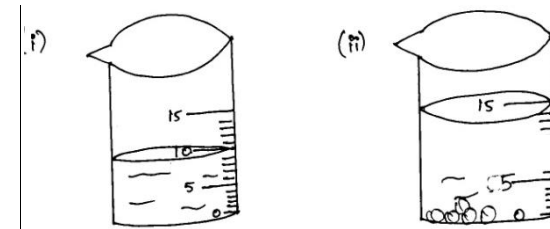


- In which subject the students like most?
- How many percentage like Tamil as favourite subject?
- How many percentage like Hindi & English?

12. Complete the pattern and write the rule of it

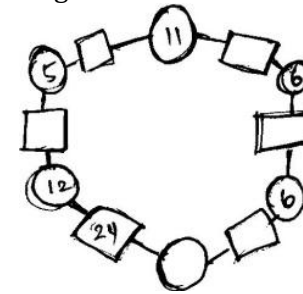


13. The volume of water inside the beaker (i) is 10ml after inserting 5 marbles it raised to 15ml in beaker (ii)
- Find the volume of 5 marbles in beaker (ii)?
 - Write the volume of cuboid formula?



IV. Answer the following: (Any 3) 3x3=9

- A 2 rupee coin weighs 4g. What is the weight of a sack with
 - 1100 coins? _____ kg _____ g.
 - 4 coins? _____ g.
- Complete the magic Hexagon.



- Anitha went to market. She bought 8 apples, oranges 10, Kivi 5. Show this using Tally marks.
- Find the difference between largest 4 digit number and smallest 3 digit number.

I. Multiple choice questions: 5x1=5

- Which letter has the vertical line symmetry?
 a) A b) C c) K d) J
- The objects or figures which can be divided into parts of equal shape and size are called _____.
 a) 2D shape b) Symmetry c) Asymmetrical d) Rotation
- The fractional numbers having denominators 10,100, . . . etc, are called _____.
 a) Area b) Perimeter c) Decimals d) Reflection
- $0.6 + 0.60 =$ _____.
 a) 0.66 b) 1.20 c) 0.6 d) 0.120
- When a number is subtracted from itself the difference is always _____.
 a) The number itself b) One c) Zero d) None

II. Match the following: 5x1=5

- | | | |
|-------------------|---|-------------|
| 6. Difference | - | 0.1 |
| 7. Sum | - | Reflection |
| 8. $\frac{1}{10}$ | - | Addition |
| 9. $\frac{1}{3}$ | - | Subtraction |
| 10. Mirror image | - | 120° |

III. Solve the following: 3x2=6

- Give half a turn to the alphabets A to Z. Find which of them still looks the same.
- Ashok has Rs. 60. A pen costs 5 Rupees. How much will one dozen pen cost?
- Solve: 192×28 .

IV. Answer the following: (Any 3) 3x3=9

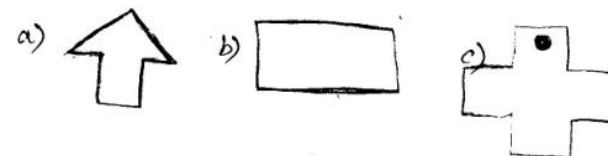
14. The temperature of the cities are given below.

City	Temperature	City	Temperature
Chennai	16.2°c	Bhopal	9.8°c
Srinagar	9°c	Jaipur	27°c

- Which city had the highest temperature?
- What is the difference between the temperature in Srinagar and in Bhopal?

15. Do the division and check your result by multiplication. $161 \div 7$.

16. Draw the following shapes which would look like after $\frac{1}{4}$ turn and $\frac{3}{4}$ turn.



- 48 hours = ____ days. (1)
 - How many half hours make a day? (2)

12.03.2020 EVERWIN VIDHYASHRAM SR. SEC. SCHOOL
STD: V YA-COMPREHENSIVE REVISION PROGRAMME
[FN] EVS (PART - III)

(Ama, Beau, Che, Daz, Ene, Ple, Won)

I. Fill in the blanks:

1. Green leafy vegetables like lettuce contain _____.
2. A big wall is built across the river is called a _____.
3. To purify petroleum, it is sent to _____.

II. State True or False:

4. Malaria is more common at the end of summer season.
5. Petrol and diesel can be used to run machine.

III. Answer in short:

6. a) Why did Jatryabhai collect rubber pieces of old tyres?
b) Which are the states of India have oil fields?

7. What is an Anaemia?

8. What is Migration?

9. a) How is medicine for malaria made? (OR)
b) Define Refinery.

IV. Answer in paragraph:

10. a) Write some uses of petroleum. (OR)

b) List some problems and preventive measures for anaemia.

V. Write the scientific term for the following:

11. Quarrel - 12. Bark -

VI. HOTS:

13. I will not last forever. Save me for your children. Who am I?

VII. MAP:

14. Mark the following places in the World outline map.

- a) Asia b) Australia c) North America d) South America
e) Africa f) Antarctica g) Pacific Ocean h) Indian Ocean

Marks: 25
Time: 1hr

3x1=3

2x1=2

4x2=8

(OR)

1x4=4

2x1½=3

1x1=1

(4)

12.03.2020 EVERWIN VIDHYASHRAM SR. SEC. SCHOOL
STD: V YA-COMPREHENSIVE REVISION PROGRAMME
(FN) (Fabulous) L2 TAMIL (PART - III)

பகுதி - I

அ. பொருள் தருக:

1. எத்திசை - 2. வனப்பு -

ஆ. எதிர்ச்சொல் எழுதுக:

3. இன்பம் X 4. உண்டு X

இ. பிரித்து எழுதுக:

5. நலனெல்லாம் - 6. உழவுத்தொழில் -

ஈ. சேர்த்து எழுதுக:

7. தமிழ் + தாய் - 8. என்று + உரைத்தல் -

உ. கோடிட்ட இடத்தை நிரப்புக:

9. இன்பத்தைத் தருவது

10. மக்களுக்கு அறுசுவை உணவளித்தவர்

ஊ. சரியான விடையைத் தேர்ந்தெடுத்து எழுதுக:

11. தரணி இச்சொல்லின் பொருள்

- அ) மலை ஆ) உலகம் இ) காடு ஈ) வானம்

12. குயில் எனக் கூவியது.

- அ) கீச் கீச் ஆ) கூ கூ இ) கொக் கொக் ஈ) பக்பக

எ. வாக்கியத்தில் அமைத்து எழுதுக:

13. உணவு -

ஏ. மனப்பாடப் பகுதி:

14. 'கண்வனப்பு' எனத் தொடங்கும் சிறுபஞ்சமூலம் மனப்பாடப் பாடலை அடிபிறழாமல் எழுதவும்.

பகுதி - II

ஐ. குறுவினா: (எவையேனும் நான்கிற்கு மட்டும் விடையளி) 4x1½=6

15. உயிர் காக்கும் நெல்லிக்கனியை யாா, யாருக்குக் கொடுத்தார்?

16. இணைச் சொற்கள் எத்தனை வகைப்படும் அவை யாவை?

17. பொன்னையும், மண்ணையும் விடச் சிறந்தது எது?

18. உழவுத் தொழிலால் என்னென்ன நன்மைகள் ஏற்படுகின்றன?

19. சிறந்த நிருவாகியாக ஊர்த்தலைவர் யாரை அறிவித்தார்?

20. வல்வில் ஓரியின் சிறந்த பண்பு யாது?

ஓ. சிறுவினா: (எவையேனும் ஒன்றனுக்கு விடையளி) 1x2=2

21. அடுக்குத்தொடர் என்றால் என்ன? எடுத்துக்காட்டுத் தருக.

22. பரிசு பெற்ற பாணன் மன்னனை எவ்வாறு வாழ்த்தினான்.

பகுதி - III

ஔ. கடிதம்:

23. தெரு விளக்கு வேண்டி மாநகராட்சி ஆணையருக்கு கடிதம்.

Marks: 25
Time: 1hr

2x1=2

2x1=2

2x½=1

2x½=1

2x1=2

2x½=1

1x1=1

(3)

4x1½=6

1x2=2

1x4=4

12.03.2020 EVERWIN VIDHYASHRAM SR. SEC. SCHOOL Marks: 25
STD: V YA-COMPREHENSIVE REVISION PROGRAMME Time: 1hr
[FN] (Ele, Emi, Glo, Fas) ENGLISH (PART – III)

I. Synonyms: 2x1=2

1. Fearless - 2. Hush –

II. Antonyms: 2x1=2

1. Obey X 2. Worthy X

III. Annotation: 1x2=2

1. ‘The children of the village shouted with joy whenever they saw him because he played with them’.

a) Whom does the word ‘he’ refer to?

b) Who shouted with joy whenever they saw him?

IV. Frame sentence: 1x1=1

1. Beloved –

V. Memoriter: 1x4=4

1. Write the first four lines of the poem “Topsy Turvy Land”.

VI. Answer in short: (Any 2) 2x2=4

1. Who was the quiet one in the class?

2. Where did Malu want to travel?

3. Why did the Ningthou want to select their future king?

VII. Notice writing: 1x3=3

You are the School Pupil Leader of Everwin Vidhyashram, Kolathur.

Write a notice informing the students about a drawing competition to be held on 14th March.

VIII. Literature: Fill in the blanks: 4x½=2

1. ____ story was exciting.

2. ____ wished to have a little man with them to do all their work.

3. He went out in night on hearing the voice of the old ____.

4. He saw the old owl on the ____ and he climbed the tree and sat next to her.

IX. Grammar: Do as directed: 10x½=5

1. I grow crops in fields ____ (farmer / cobbler)

2. I saw a ____ of lions in the sanctuary (complete the sentence with collective noun)

3. This carton is mine (write P for possessive pronoun and A for possessive adjective for the underlined word)

4. Write the superlative degree of the word ‘tall’.

5. She gave the book to Mrs. Brown (Identify whether the underlined word is subjective (S), objective (O) or possessive case (P))

6. The little girl saw ____ in the mirror (Complete the sentence with reflexive pronoun)

7. Do you want to play chess ____ carrom? (Use the appropriate conjunction)

8. I waited ____ the train arrived (Until / because)

9. Please leave me alone (State whether the sentence is active voice or passive voice)

10. Javed spotted the black snake (change into passive voice)