

06.03.2020 EVERWIN VIDHYASHRAM SR. SEC. SCHOOL Marks: 25  
 STD: VI YA-COMPREHENSIVE REVISION PROGRAMME Time: 1hr  
 (FN) (Bri, Che, Daz, Fas, Ple, Eff) ENGLISH (PART - I)

I. Write the synonyms: 2x1=2  
 1. Surveyed - 2. Ill-omened -

II. Write the antonyms: 2x1=2  
 1. Rectify X 2. Identified X

III. Frame sentence: 2x1=2  
 1. Competition - 2. Reported -

IV. Annotation: 1x2=2  
 1. "There won't be any calendar, there won't be any clock;"  
 a) What does calendar signify?  
 b) What does clock signify?

V. Answer the following in short: (Any 2) 2x2=4  
 1. What did Tom do while Ben was white washing the fence?  
 2. Which words have been used to describe the 'school'?  
 3. What is 'Pentathlon'? what does it comprise of?

VI. Answer in paragraph: 1x3=3  
 1. Write about the description given by Grady on the appearance of the aliens.

VII. Literature: Answer in paragraph (Any one) 1x5=5  
 1. Narrate the story of "Attila".  
 2. Depict the story of "The Hotel Stefani".

VIII. Grammar: (Do as directed) 10x½=5  
 1. Choose the right possessive pronoun:  
 They are playing with John's toys. The toys are not \_\_\_\_ (his / theirs)  
 2. Fill in the blank with adjective formed from the noun given in the brackets: Megha is a really \_\_\_\_\_ person. (help)  
 3. Fill in the blank using article: Switzerland is \_\_\_\_ European country.  
 4. State whether the underlined words are subjective complement or objective complement.  
 Our Principal appointed me the secretary of our class.  
 5. Use can or could instead of the words underlined in the following sentences: Dipti has the ability to do difficult sums.  
 6. Place the adverb given in the brackets in the sentence and rewrite it:  
 The exercise was tiring. (rather)  
 7. Write the possessive form of the following:  
 The plays of Tagore → \_\_\_\_\_.  
 8. Choose the right answer:  
 One of the travellers \_\_\_\_ (have / has) complained about the bus.  
 9. State the following sentences is active or passive voice:  
 They saw the match yesterday.  
 10. Fill in the blanks with the right conjunction:  
 I switched the computer on \_\_\_\_ (because / but) it did not start.

06.03.2020 EVERWIN VIDHYASHRAM SR. SEC. SCHOOL Marks: 25  
 STD: VI YA-COMPREHENSIVE REVISION PROGRAMME Time: 1hr  
 (AN) (Bri, Che, Daz, Fas, Ple, Eff) ENGLISH (PART - II)

I. Write the synonyms: 2x1=2  
 1. Foul - 2. Pursuit -

II. Write the antonyms: 2x1=2  
 1. Tread X 2. Accomplished X

III. Frame sentence: 2x1=2  
 1. Belongs - 2. promptly -

IV. Annotation: 1x2=2  
 "Ganga Devi once said, "I was just like Ahilya before receiving the National Award".  
 a) Who said these words?  
 b) Who is Ahilya?

V. Answer the following in questions: (Any 2) 2x2=4  
 1. How is the region of Mithila conducive to art forms?  
 2. Why did the merchant smile?  
 3. What weapon did the twins use to scare the ghost?


VI. Notice Writing: 1x3=3  
 You are the class monitor. Your class is going on a one day trip to Guindy National Park. Write a notice for the notice board inviting names for the trip. Give details about the dates of the trip and expenditure involved.

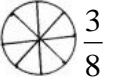
VIII. Literature Reader: 1x5=5  
 Write a short paragraph depicting the story of "The Cop and the Anthem".

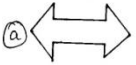

IX. Grammar: 10x½=5  
 A. Choose the right answer and fill in the blanks:  
 1. Sam \_\_\_\_ a cute dog. (has / have)  
 2. She walked \_\_\_\_ the classroom. (Into / in / at)  
 B. Change the following direct speech into indirect speech:  
 3. Doctor said to Hashim, 'You should take rest for a few days'.  
 4. My friend said to me, 'Your uniform is very dirty'.  
 C. Rewrite the following sentences with proper punctuation marks:  
 5. john wants storybooks pencils erasers and a school bag.  
 6. gandhiji said where there is love there is life.  
 D. Underline the interjection:  
 7. Hello, is this Samuel?  
 E. Circle the subjects and underline the predicates in the following sentences:  
 8. John is painting his house.  
 9. The book with the blue cover was my mother's gift to me.  
 F. Fill in the blank with the right form of the verbs: (Past continuous tense / Future continues Tenses)  
 10. When I \_\_\_\_ (talk) to the painter yesterday, our dog jumped on him.

- I. Multiple choice questions: 5x1=5
- \_\_\_ is a part, of a whole.  
 a) Numerator b) Denominator c) Fraction d) None
  - \_\_\_ has one line of symmetry.  
 a) Square b) Rectangle c) Rhombus d) Isosceles triangle
  - \_\_\_ is used to compare the lengths.  
 a) Compass b) Set-Square c) Divider d) Protractor
  - In \_\_\_ fractions numerators are less than the denominators.  
 a) Improper b) Proper c) Like d) Mixed
  - \_\_\_ does not have line of symmetry.  
 a) M b) Q c) Y d) C

- II. Match the following: 5x1=5
- |                           |   |                             |
|---------------------------|---|-----------------------------|
| 6. $1\frac{3}{4}$         | - | Lowest form                 |
| 7. T                      | - | $90^\circ$                  |
| 8. D                      | - | Vertical line of symmetry   |
| 9. Perpendicular bisector | - | Horizontal line of symmetry |
| 10. $\frac{11}{10}$       | - | Mixed fraction              |

- III. Solve the following:
11. a) Write the fraction representing the shaded portion.  $3 \times 2 = 6$
- 

- b) Colour the part according to the given fraction.  $\frac{3}{8}$
- 

12. Draw and write the number of lines of symmetry for the following.
- (a)  (b) 

13. Solve:  $\frac{4}{3} - \frac{1}{2}$ .

- IV. Word problems: (Any 3) 3x3=9
14. Construct a perpendicular bisector for  $\overline{PQ} = 7.5\text{cm}$ .

15. Praveen was given  $2\frac{1}{2}$  piece of cake and Deena ways given  $1\frac{1}{3}$  piece of cake. Find the total amount of cake was given to both of them.

16. Draw and write the number of lines of symmetry for the following shapes. (a) Square (b) Circle.

17. Kala exercised for  $\frac{3}{4}$  of an hour, while Vasu exercised for  $\frac{2}{6}$  of an hour.  
 Who exercised for a longtime?

- I. Multiple choice questions: 5x1=5
- The decimals having different number of decimal places are called \_\_\_ decimals.  
 a) Like b) Unlike c) Same d) Different
  - The distance between two points is called \_\_\_\_.  
 a) Line b) Area c) Length d) Width
  - In a bar graph, bars of uniform \_\_\_ can be drawn horizontally or vertically.  
 a) Length b) Width c) Weight d) Line
  - The amount of surface enclosed by a closed figure is called its \_\_\_\_.  
 a) Perimeter b) Area c) Volume d) Region
  - Which of the following is the decimal form of  $\frac{625}{100}$ ?  
 a) 62.5 b) 6.25 c) 0.625 d) 625.0

- II. Match the following: 5x1=5
- |                                     |   |                      |
|-------------------------------------|---|----------------------|
| 6. 0.05                             | - | 12 inches            |
| 7. 9g                               | - | 5-Hundredths         |
| 8. Perimeter                        | - | 8                    |
| 9. 1 foot                           | - | 0.009kg              |
| 10. $\parallel \parallel \parallel$ | - | Sum of all the sides |

- III. Solve the following: 3x2=6
11. Subtract 5.358 from 9.756.

12. Fill this table using tally mark:

Choices	Tally marks	No. of students
Banana		8
Orange		3
Apple		5
Guava		4

13. Find perimeter of a square whose side is 25cm.

IV. Word problems: (Any 3)

$$3 \times 3 = 9$$

14. Raju travelled 4km 268m by bus, 2km 60m by car and the 1km 50m on foot in order to reach his school. How much distance did he travel in all?

15. The area of rectangular cardboard is 560sq. cm. and its breadth is 8cm.

What is the length of the cardboard

16. Express as km using decimals: a) 9852m b) 90km 8m.

17. The number of scouts in a school is depicted by the following pictograph.

Class	No. of students
VI	☺ ☺ ☺ ☺
VII	☺ ☺
VIII	☺ ☺ ☺ ☺ ☺ ☺
IX	☺ ☺ ☺
X	☺

Observe the pictograph & answer the following questions:

- Which class has the minimum number of scouts?
- How many scouts are there in class VI?
- Which class has exactly four times the scouts as the of class X?

06.03.2020 EVERWIN VIDHYASHRAM SR. SEC. SCHOOL  
STD: VI YA-COMPREHENSIVE REVISION PROGRAMME  
(FN) (Attr, Cre, Fab, Maj) SOCIAL (PART - I)

Marks: 25

Time: 1hr

I. Fill in the blanks

2x1=2

1. \_\_\_\_\_ literature was popular in Tamil Nadu.

2. The Pacific Ocean is \_\_\_\_\_ in shape.

II. Match the following

4x½=2

1. Lithosphere - Dr. B. R Ambedkar

2. The Jog Falls - Grama Bhojaka

3. Untouchability - Solid portion of earth

4. Village headman - Karnataka

III. State True or False

2x1=2

1. Air moves from low pressure to high pressure

2. Non - Whites could vote in south Africa before 1994.

IV. Answer in short (Any 3)

3x2=6

1. How does the power of the government gets limited?

2. What are erosion and deposition?

3. Why is the Northern Hemisphere called the Land Hemisphere?

4. Write few functions of the Grama Bhojaka.

5. What is the difference between a Mountain and a Plateau.

V. Answer in Detail (Any 2)

2x4=8

1. Explain the following oceans :

a) The Pacific Ocean

b) The Indian Ocean and

c) The Southern Ocean.

2. Write about Mathura.

3. One of the important ways of participating is to take interest in the working of the government and to criticise it when required Explain with an example.

VI. Mark the following places in the World Outline Map (4 Marks)

a) Ural Mountains b) Great Dividing Range c) Sahara Desert

d) Southern Ocean e) Africa

VII. HOTS:

1x1=1

1. From the point of view of commerce, \_\_\_\_\_ is the busiest ocean.

I. Fill in the blanks 4x1=4

1. The people of chizami village do \_\_\_\_ farming.
2. The other name of Middle Himalaya is \_\_\_\_\_.
3. The People of pudupet village earn their living by \_\_\_\_\_.
4. The western coastal plain are very \_\_\_\_\_.

II. Multiple choice question 3x1=3

1. The USA has \_\_\_\_\_ time zones.  
a) Two      b) Four      c) Seven      d) Eight
2. The most fertile river valley was \_\_\_\_\_.  
a) Kaveri      b) Yamuna      c) Ganga      d) Narmada
3. The Bay of Bengal lies \_\_\_\_ to India.  
a) North      b) East      c) West      d) South

III. State True or False 3x1=3

1. Lakshadweep Islands are coral Islands.
2. Larger houses have to pay less taxes.
3. The main crop of Kalpattu village is paddy.

IV. Answer in short (any 3) 3x2=6

1. What is Municipal corporation?
2. Write a short note on Bodhisattvas.
3. Where is known as Migration?
4. Whom were Muvendar referred in Sangam Poem?
5. Write some sentences on the work of agriculture.

V. Answer in Detail (any 2) 2x4=8

1. How unity in Diversity exist in India?
2. How does the Municipal corporation get its money?
3. Discuss the reason why the Chinese pilgrims came to India.

VI. HOTS: (1)

1. Which empire considered Pepper as “ Black Gold” ?