

06.03.2020 (FN)

MATH WRITTEN (Part – I)

20 MARKS

NAME : _____

LKG - _____

I. Number Dictation

4 x 1 = 4

| | |
|---|--|
| a | |
|---|--|

| | |
|---|--|
| b | |
|---|--|

| | |
|---|--|
| c | |
|---|--|

| | |
|---|--|
| d | |
|---|--|

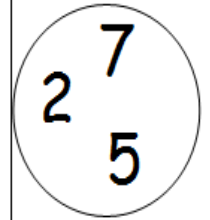
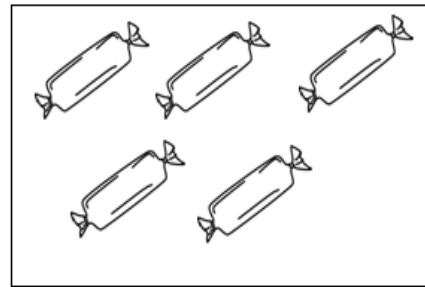
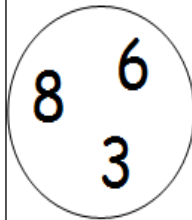
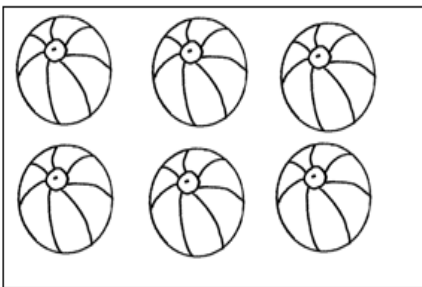
II. Write the numerals

8 x ½ = 4

| | | | | | | | | | | |
|----|--|--|--|--|--|--|--|--|--|----|
| 21 | | | | | | | | | | 30 |
|----|--|--|--|--|--|--|--|--|--|----|

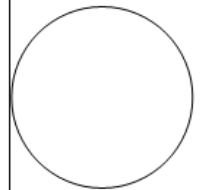
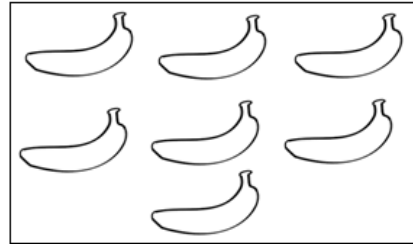
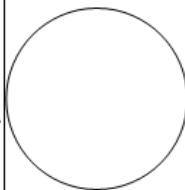
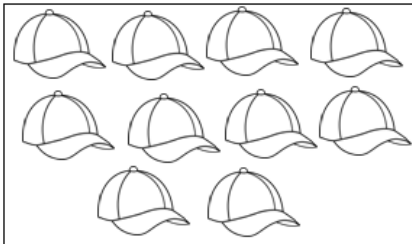
III. Count and circle the correct number

2 x 2 = 4





IV. Count and write the correct number

2 x 2 = 4



V. Match the following

4 x 1 = 4



EVERWIN VIDHYASHRAM SR. SEC. SCHOOL
COMPREHENSIVE REVISION PROGRAMME - YA

06.03.2020 (AN)

MATH ORAL

10 MARKS

NAME : _____

LKG - _____

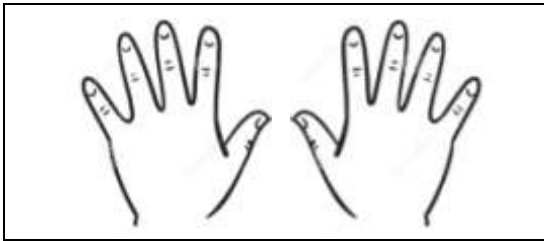
I. Tell the Numerals 31 to 40

5 Marks

II. Identify the following

5 × 1 = 5

| | | |
|----|-----|------|
| 30 | two | four |
|----|-----|------|



EVERWIN VIDHYASHRAM SR. SEC. SCHOOL
COMPREHENSIVE REVISION PROGRAMME - YA

06.03.2020 (AN)

MATH ORAL

10 MARKS

NAME : _____

LKG - _____

I. Tell the Numerals 31 to 40

5 Marks

II. Identify the following

5 × 1 = 5

| | | |
|----|-----|------|
| 30 | two | four |
|----|-----|------|

