

I. Write the synonyms of: 2x1=2

1. Fervently - 2. Grin –

II. Write the antonyms of: 2x1=2

3. Abundance X 4. Worse X

III. Frame sentences: 1x1=1

5. Sniggered –

IV. Explain with reference to the context: 2x1=2

6. “Can we erect a grave stone in her memory?”

- a) Who said these words to whom?
b) Why were these words spoken?

V. Answer in short: (Any 3) 3x1½=4½

7. Why was Yank at a disadvantage when he joined his new school in the USA?

8. Do you think Sadako believed in one thousand crane legend?

9. What did the villagers do to help the mother?

10. What kind of contrast does the poet create in the first stanza through the images of nature?

VI. Answer in paragraph: (Any 1) 1x2½=2½

11. Write a few qualities of Sadako that made her an engaging person.

12. What were the other reasons that added to Yang’s difficulties besides his poor English?

13. What emotions do the last three lines of the poem convey? What is the poet trying to communicate to the reader through the poem ‘Night of the scorpion’?

VII. Answer in detail: (Any 1) 1x3=3

14. What happened a year back during summer in ‘Spring Time A La carte’?

15. Write the life sketch of Sadako.

16. How did Yang’s siblings react to their new school and environment?

VIII. Lexical writing: (Any 1) 3x1=3

Read the following passage carefully and answer the questions that follow:

The surgeon was surprised to find a brilliant diamond that sparkled in the most beautiful way. Sandy swore to the prince that he will treasure it forever. After the prince left Robert rushed to the jeweller named Harry Gold. He got to know from the jeweller that the stone is worth half a million pounds.

Questions:

17. Why was the surgeon surprised?

18. What did Sandy swear?

19. What did Sandy do after the prince left?

Letter writing: (OR) (3)

20. Write a letter to ‘The Water Board of Municipal Corporation’ about the irregular supply of water in your area.

IX. Grammar: Rewrite as directed: (5)

21. She bought both the shirts for she couldn’t choose between them.

(Change into complex sentence using ‘because’)

22. Uma and Ira were late because their car had a flat tyre. (Identify whether the given sentence is simple / compound / complex)

23. Although it was raining, we continued playing football. (Identify the main clause and the subordinate clause)

24. My shawl is not ____ (long) than my mother’s saree. (Fill with correct degree of adjective)

25. The green jacket is big for me. The red jacket is small for me. (big)
(Make sentence using comparative degree of adjective with the word given in bracket)

- I. Write the synonyms of: $2 \times 1 = 2$
1. Voyage - 2. Clearly -
- II. Write the antonyms of: $2 \times 1 = 2$
3. Provoke X 4. Frown X
- III. Frame sentences: $1 \times 1 = 1$
5. Yell -
- IV. Explain with reference to the context: $2 \times 1 = 2$
6. When I heard this, I didn't want to laugh anymore and it felt terribly sad.
- a) Who is "I" is the given line?
b) Why did the speaker feel sad?
- V. Answer in short: (Any 3) $3 \times 1\frac{1}{2} = 4\frac{1}{2}$
7. Describe the visitors who had come in the spaceship.
8. Who was Huntingdon? Write a short note on him.
9. Comment on the phrase "Small gulf" in the last stanza.
10. What discrimination did the narrator undergo on daily basis at school?
- VI. Answer in paragraph: (Any 1) $1 \times 2\frac{1}{2} = 2\frac{1}{2}$
11. What happened to uncle Misak when he turned forty?
12. Did Mrs. and Mr. Alsop realize that their guests were aliens? Give reason to support your answer?
13. Narrate the humiliating incident that the narrator experienced at school.
- VII. Answer in detail: (Any 1) $1 \times 3 = 3$
14. What qualities of Rafferty could be easily noticed after reading the humorous story.
15. How did different people express their dislike for the narrator's mop of hair? What was the narrator's reactions?
16. Narrate the story of "The Diamond Maker"

IX. Grammar:

17. Identify the type of sentences: (2)
- a) What a cute dog! _____.
b) Who is sitting on top of the tree? _____.
c) Please shut the door. _____.
d) I completed my essay. _____.
18. Punctuate the following: (1)
- a) The boss was angry and shouted why isn't he here He hasn't finished that report yet.
19. Fill in the blanks with relative pronouns: (1)
- a) Can I have the pencil ____ I gave you this morning?
b) Yesterday was a day ____ everything went wrong.
20. Choose the best option and fill in the blanks: $2 \times \frac{1}{2} = 1$
- a) I ____ (happy / happily / happier) assist you.
b) We are ____ (quick / quicker / quickly) approaching the deadline.
- X. Answer any one of the following: $1 \times 3 = 3$
21. Letter writing:
- a) Write a letter to your Grandfather asking him to come and stay with you during vacations. (OR)
22. Report writing:
- a) Write a report on the seminar organised by your school on water conservation as part of the World Water Day Celebration.

05.03.2020 EVERWIN VIDHYASHRAM SR. SEC. SCHOOL Marks: 25
STD: VIII YA-COMPREHENSIVE REVISION PROGRAMME Time: 1hr
(FN) (Act, Att, Dyn) SOCIAL (PART – I)

I. Fill in the blanks: 5x1=5

1. ____ is defined as a right to vote.
2. The difference between birth rate and death rate is known as ____.
3. ____ was setup in 1950 with the insistence of five year plan.
4. Article 21 of the Constitution guarantees _____.
5. ____ is the process of watering plants in agriculture by artificial means.

II. Answer in short: (Any 3) 3x2=6

1. Why is the Supreme Court called the guardian of the Constitution?
2. Enumerate the laws passed by British to improve the status of women.
3. What are the advantages to foreign companies in setting-up production in India?
4. Define Idgah.

III. Answer in paragraph: (Any 2) 3x2=6

1. How does the government ensure social justice?
2. Give an account of the age structure of world population.
3. What economic impact did the First World War have on India?

IV. Answer in detail: (Any 1) 1x4=4

1. What are the major sources of environmental pollution?
2. Contrast the growth of population between the developing and developed countries.

V. Value Based Points: 1x2=2

1. Write few points on Article 370.

VI. Mark the following in the given map: 4x½=2

- a) Pondicherry b) Bombay c) Burma d) Nepal

05.03.2020 EVERWIN VIDHYASHRAM SR. SEC. SCHOOL Marks: 25
STD: VIII YA-COMPREHENSIVE REVISION PROGRAMME Time: 1hr
(AN) (Act, Att, Dyn) SOCIAL (PART – II)

I. Fill in the blanks: 5x1=5

1. ____ is a process in which metals are extracted from their ores by heating beyond the melting point.
2. ____ is a bright coloured and printed scarf for neck and head.
3. Third category of imperial art was called ____ painting.
4. ____ means to force someone to do something.
5. ____ is a labour – intensive industry which involves rearing silkworm and producing silk.

II. Answer in short: (Any 3) 3x2=6

1. Explain the term Scheduled Tribes.
2. What is mural?
3. What is Secularism?
4. What are the main factors which influence the location of an industry?

III. Answer in paragraph: (Any 2) 2x3=6

1. What happened to the weavers and spinners who lost their livelihood?
2. What does the term 'mainstream' denote?
3. Describe the various stages of production in industries.

IV. Answer in detail: (Any 1) 1x4=4

1. Who were the weavers? Describe the different stages of production.
2. Describe main characteristics of shifting agriculture.

V. Value Based Points: 1x2=2

1. Write few points about TATA.

VI. Mark the following in the given map: 4x½=2

1. A rice growing place. 2. One rice and cotton growing place.
3. A wheat growing place. 4. A rice and wheat growing place.

05.03.2020 EVERWIN VIDHYASHRAM SR. SEC. SCHOOL Marks: 25
STD: VIII YA-COMPREHENSIVE REVISION PROGRAMME Time: 1hr
(FN) (Bli, Cap, Con, Fan, Fas, Maj) SCIENCE (PART – I)

I. Answer in one word: 5x1=5

1. Name the thread like structure present in the nuclear.

2. Identify the non-metal.

a) Gold b) Silver c) Iodine d) Copper

3. $C + O_2 \rightarrow ?$

4. Smoke and fog together is called _____.

5. Disinfection of water can be done by _____.

II. Answer in short: (Any 3) 3x2=6

6. What is potable water?

7. Expand CFC. Where does it find its use?

8. What is nuclear membrane?

9. Draw a flow chart for the levels of organisation in 'living cell'.

10. What are Sonorous materials?

III. Answer in paragraph: (Any 3) 3x3=9

11. Give some uses of non – metals.

12. State the difference between Eukaryotes and prokaryotes.

13. Write short notes on cytoplasm.

14. Explain the difference between pure air and polluted air.

15. Why does the increased level of nutrients in the water affect the survival of aquatic organisms?

IV. Answer in detail: 1x5=5

16. a) You are a member of the municipal body of your town. Make a list of measures that would help your town to ensure the supply of clean water to all its residents. (OR)

b) Draw and label "animal cell".

05.03.2020 EVERWIN VIDHYASHRAM SR. SEC. SCHOOL Marks: 25
STD: VIII YA-COMPREHENSIVE REVISION PROGRAMME Time: 1hr
(AN) (Bli, Fan, Fas) SCIENCE (PART – II)

I. Answer in one word: 5x1=5

1. Splitting of light into its constituent colours is known as _____.

2. Lack of which vitamin is responsible for eye troubles?

3. Circle the odd one out in the following:

i) Plastic, Copper, Aluminium, Graphite

ii) Measles, Chicken Pox, Typhoid, Polio.

4. Fill in the blanks:

i) The longer lead in a LED is always connected to the ____ terminal of the battery.

ii) _____ system helps visually challenged persons to read and write.

5. I am a bacteria involved in the fixation of nitrogen in leguminous plants. Who am I?

II. Answer in short: (Any 3) 3x2=6

6. State the laws of reflection.

7. Does pure water conduct electricity? If not, what can we do to make it conducting?

8. What is accommodation?

9. Define Electrolysis.

10. Dough gets spoilt faster than dry flour. What is the reason behind it?

III. Answer in paragraph: (Any 3) 3x3=9

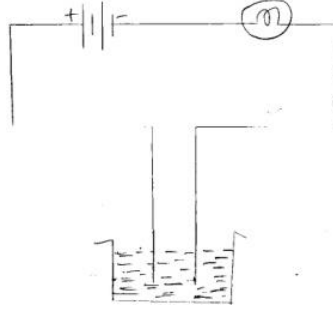
11. What micro-organism act as decomposer? How is this activity useful to us?

12. Mention against each of the following whether regular or diffused reflection will take place when a beam of light strikes. Justify your answer in each.

- a) Cardboard surface b) Piece of paper c) Mirror

13. The bulb does not glow in the setup shown. List the possible reasons.

Explain your answers.



14. Differentiate between regular and diffused reflection.

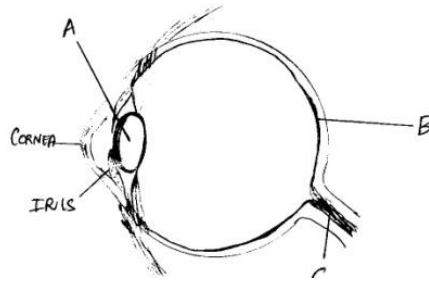
15. When the free ends of a tester are dipped into a solution, the magnetic needle shows deflection. Can you explain the reason?

IV. Answer in detail: (Any 1)

1x5=5

16. a) What are the major groups of micro-organisms? (OR)

b) Observe the diagram given below and answer the following questions.



i) Identify the parts A, B, C of the diagram.

ii) Consider the statement - "Raghu has brown eyes". Which part of the eye does this statement refer to?

iii) Suggest two ways to take care of our eyes.

05.03.2020 EVERWIN VIDHYASHRAM SR. SEC. SCHOOL Marks: 20
STD: VIII YA-COMPREHENSIVE REVISION PROGRAMME Time: 1hr
(AN) (Conf, Cap) L3 HINDI

i) Write in English

a) कड़ावतें [प्रत्यय] [2x½=1]

1. हाथ को हाथ पहचानता है। 2. जहाँ चाह वहाँ रह।

b) use of 'want' [चाह का प्रयोग] [2x½=1]

1. मैं हिन्दी सीखना चाहता हूँ। 2. वे आप की सहायता करना चाहते हैं।

ii) Write in Hindi

(a) Homonyms [2x½=1]

1. शाम —

श्याम —

(b) शब्द सीढ़ी बनाइए [word ladder] [4x½=2]

[कलम, याक, नदी, दिया]

(c) निम्न संख्या [fractional numbers] [2x½=1]

1. ¼ — 2. 3/4 —

(क) लिंग बदलकर लिखिए [gender] [2x½=1]

1. चूहा — 2. बैल —

(ख) विलोम शब्द लिखिए [opposites] [2x½=1]

1. निश्चय x 2. जन्म x

(ग) वचन बदलकर लिखिए [singular/plural] [2x½=1]

1. सड़क — 2. माला —

(घ) Choose the correct answer. [2x½=1]

[शीश, ह्रस्व, प्राण]

1. उसीने उसमें — जगाया। 2. उसका ही गुण गाए —

(ङ) एक शब्द में उत्तर दीजिए [answer in one word] [2x½=1]

1. गाय का दूध कैसा होता है? 2. घोड़ा कैसा जानवर है?

(च) उपसर्ग अलग करके लिखिए [prefix] [2x½=1]

1) अनपद 2) असफल

(छ) प्रत्यय अलग करके लिखिए [suffix] [2x½=1]

1) सफलता 2) जाकर

(ज) Write 2 lines about Gandhi in Hindi [गाँधीजी के बारे में लिखिए] (1)

(L) Poetry Comprehension (1 Mark)

सूरज ने भेजा धरती पर,
अपनी बेटी किरण धूप को,
साथ खेलेते धरती ने भी
उगा दिया झट हरी दूब को,

(1) किरण किसकी बेटी है ?

(2) धरती ने क्या आया ?

(M) Prose Comprehension (1m)


भारत हमारा देश है। यह पुराना और विशाल देश है।
उत्तर में ऊँचा हिमालय पहाड़ है। भारत के पूरब, पश्चिम
और दक्षिण में समुद्र है।

(N) हमारा देश क्या है ?

(N) जोड़िए [Match] [6x½=3]

1. पत्र - आम
2. वैशाख - मौर
3. ज्येष्ठ - जून - जुलाई
4. आषाढ़ - मार्च - अप्रैल
5. राष्ट्रीय फ़ी - अप्रैल - मई
6. राष्ट्रीय फल - मई - जून

(O) चित्र वर्णन कीजिए [Picture comprehension] (1M)
[write few sentences about picture]



05.03.2020 EVERWIN VIDHYASHRAM SR. SEC. SCHOOL Marks: 20
STD: VIII YA-COMPREHENSIVE REVISION PROGRAMME Time: 1hr
(AN) (Majestic) L3 TAMIL

I. கீழ்க்காணும் சொற்றொடரை எதிர்மறைப் பொருளில் மாற்றி எழுதுக: $2 \times \frac{1}{2} = 1$

(Convert the positive sentences into negative sentences)

1. திராட்சைக் குலை நரிக்கு எட்டும்.

2. இந்த வண்ணம் சுவரில் ஒட்டும்.

II. எவ்வகைக் காலம் என எழுதுக: (Identify the tenses) $2 \times \frac{1}{2} = 1$

3. கந்தன் நூலகம் சென்று புத்தகம் படிக்கிறான்.

4. நான் நாளை வருவேன்.

III. குறிப்புச் சொற்களைக் கொண்டு சொற்றொடராக எழுதுக: $2 \times 1 = 2$

(Frame sentences Any 2)

5. (காலை, நான், மதுரைக்கு, சென்றேன், நேற்று)

IV. மரபுத் தொடருக்கான பொருளை எழுதுக: $2 \times 1 = 2$

(Write the meaning of the marabu thodargal)

6. முதலைக் கண்ணீர் - 7. ஆகாயத் தாமரை -

V. எண்களை எழுத்தால் எழுதுக: (Number names) $4 \times \frac{1}{2} = 2$

8. அ) 124 - ஆ) 155 - இ) 167 - ஈ) 106 -

VI. சரியான விடையைத் தேர்ந்தெடுத்து எழுதுக: $3 \times \frac{1}{2} = 1\frac{1}{2}$

(Choose the correct answer)

9. நான் காலையில் எட்டு பள்ளிக்குச் செல்வேன் (மணிக்கு / மனிக்கு)

10. தாய்ப்பசு விட்டு கதறியது. (கண்ணீர் / கன்னீர்)

11. முல்லை (மணக்கிறது / மனக்கிறது)

VII. பொருத்துக: (Match) $4 \times \frac{1}{2} = 2$

12. சேக்ஸ்பியர் - இரஷ்ய நாட்டு எழுத்தாளர்

13. காளிதாசர் - ஆங்கிலக் கவிஞர்

14. மில்டன் - வடமொழி நாடக ஆசிரியர்

15. டால்ஸ்டாய் - ஆங்கில நாடக ஆசிரியர்

VIII. எதிர்ச்சொல்: (Opposite) $2 \times \frac{1}{2} = 1$

16. இன்பம் X 17. உள்ளே X

IX. அடுக்குத் தொடரால் சொற்றொடரை நிரப்புக:

(Fill in the blanks using aduku thodar) $3 \times \frac{1}{2} = 1\frac{1}{2}$

(கொடுக்க கொடுக்க, வருக வருக, குவியல் குவியலாகக், சிறுக சிறுக)

18. விழாவில் தலைவரை என வரவேற்றனர்.

19. தேனீக்கள் தேன் சேர்த்தன.

20. கல்வி வளரும்.

X. பிழை திருத்தி எழுதுக: (Spot the Errors) $2 \times \frac{1}{2} = 1$

21. அவன் எங்கே சேன்றான். 22. செவல் கூவியது.

XI. வினா விடைகள்: (Answer the following) (Any 3) $3 \times 1 = 3$

23. அதிகாலையில் துயில் எழுவதனால் ஏற்படும் பயன்கள் இரண்டினை எழுதுக.

24. மூங்கில் பற்றி மூன்று வரிகள் எழுதுக.

25. காலப் பெயர்கள் நான்கினை எழுதுக.

26. மூவேந்தர் யாவர்?

27. மரூஉச் சொற்கள் பெற்று வரும் இடப்பெயர்கள் ஐந்தினை எழுதுக.

XII. கட்டுரை: (Composition) $2 \times 1 = 2$

28. 'பாம்பு' - பற்றி இரண்டு வரிகள் எழுதுக.