

I. Answer in one word

1. The insects , Butterflies , Honeybees & Birds help flowering plants in ____.

2. The magnetic effect of the current was discovered by ____.

3. 

II. Answer in short (any -3)

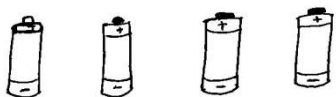
3x2=6

1. Name any two effects of electric current .

2. What are the importance of forest ?

3. List five products we get from forest.




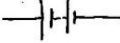

4. Connect them (Redraw them)



III. Answer in paragraph (Any -2)

2x3=6

1. Complete the table

G.No.	Electrical Components	Symbols
1)		<u> ?</u>
2)	<u> ?</u>	
3)		<u> ?</u>
4)	switch off.	<u> ?</u>
5)	<u> ?</u>	
6)	<u> ?</u>	

2. Do you think an electromagnet can be used for separation of plastic bags from a garbage heap ? Explain

3. What are decomposes ? Name any two of them. What do they do in the forest?

IV. Answer in detail : (any -1)

1x5=5

1. Explain the role of forest in maintaining the balance between Oxygen and carbon di Oxide in the atmosphere

OR

2. With help of diagram, show the working of electric bell .