




I. Look at the collection of objects and divide them into groups $3 \times 1 = 3$



II. Find out the correct value of the fractions $3 \times 2 = 6$

a. Half of 20 = **1/2**

b. one - fourth of 16 = **1/4**

c. One - third of 9 = **1/3**

III. WRITE THE FRACTION $2 \times \frac{1}{2} = 1$

