



I. Choose the correct answer: 5x1=5

- The side of a shape or an object is called _____.
 a. edge b. corner c. faces d. sequence
- The remainder should always be smaller than the _____.
 a. one b. quotient c. divisor d. zero
- 750 m + _____m = 1km.
 a. 350 b. 250 c. 150 d. 450
- The smallest unit of weight is _____.
 a. milligram b. kilogram c. gram d. meter
- We can measure a liquid using _____.
 a. ruler b. weighing Scale
 c. measuring cup d. measuring tape

II. Fill in the blanks: 5x1=5

- The standard unit of capacity is _____.
- Division means _____.
- Distance is measured in _____.
- The _____ is an old Chinese puzzle.
- We weigh vegetables in _____ or _____.

III. Match the following: 3x1=3

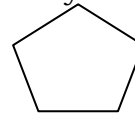
- | | | |
|--|---|----------------------|
| 1. $77 \div 7$ | - | No edges, No corners |
| 2.  | - | 1 litre |
| 3.  | - | 11 |

IV. Solve the following (Any 3) 3x2=6

- Write two division facts for the following multiplication facts.
 a. $9 \times 6 = 54$
- Convert into centimetre: 8m 32 cm
- Change kilometre into metre: 6Km.
- Draw two objects which have curved edges.

5. Convert into kilogram and gram: 8569g. 3x3=9
 V. Solve the following (Any 3)

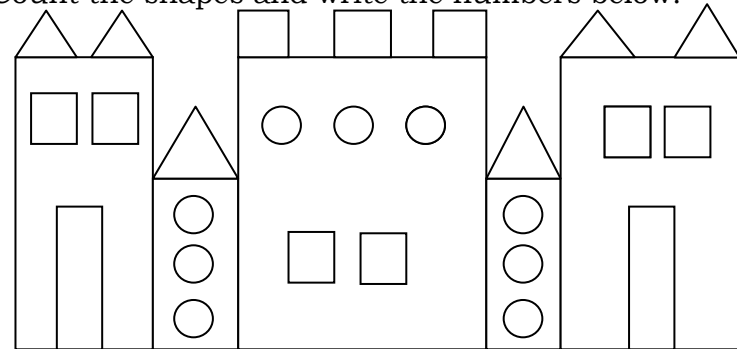
- Divide the following and write the quotient and the remainder:
 $432 \div 7$
- Change kilometre into metre 9 km 256m.
- Convert into millilitre 4l 326ml.
- Identify the following for the given shape.



Name of the shape : _____
 Number of Corners : _____
 Number of Sides : _____

5. Convert into litres and millilitres a. 1236 ml. 2x5=10
 VI. Solve the following (Any 2)

- A Captain shares 357 snails equally among his 4 friends. How many snails will each get? Find the leftover?
- Preethi sticks 8 pictures on a page. If she has 72 pictures, how many pages will she need?
- Count the shapes and write the numbers below.



Number of squares = _____
 Number of triangles = _____
 Number of circles = _____
 Number of Rectangles = _____

VII. Hots: 2x1=2

- I have 12 edges, eight corners and 6 faces. What shape am I?
 a. Rectangle b. Pentagon c. Cuboid d. Cone
- The 3 – Dimensional shape of a circle is called_____
 a. cube b. cuboid c. sphere d. triangle