

EVERWIN VIDHYASHRAM
PERIODIC ASSESSMENT - 3

NAME : _____

UKG - _____

18.12.2019 [FN]

MATH WRITTEN

MARKS : 40

I. Write the numerals

$18 \times \frac{1}{2} = 9$

181									
									200

II. Write the number names

$4 \times 2 = 8$

20	

34	

50	

18	

III. Backward Counting

$10 \times \frac{1}{2} = 5$

30					

IV. Write the Before, Between and After numbers

$6 \times 1 = 6$

	26
--	----

82		84
----	--	----

78	
----	--

	60
--	----

57		59
----	--	----

99	
----	--

V. Write the numbers in Descending order


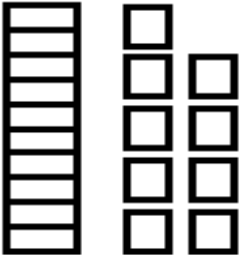
$8 \times \frac{1}{2} = 4$

33	53	93	73

62	61	68	65

VI. Place Value - See the picture and write the numbers accordingly

$2 \times 1 = 2$

		tens	ones		Number
	=			=	
	=			=	



VII. Place Value - Show the Pictorial representation of the numbers

$2 \times 2 = 4$

18 = 1 tens + 8 ones	12 = 1 tens + 2 ones

VIII. Circle the correct picture

$2 \times 1 = 2$

THICK		
--------------	---	---

NAME : _____

UKG - _____

18.12.2019 [AN]

ENGLISH STORY

MARKS: 20

I. Answer the following

4 x 5 = 20

Who came out of the pond?	What is the moral of the story "An Honest Woodcutter"?
Who was watching the two cats from a tree?	Why did the monkey bite the cake?

NAME : _____

UKG - _____

18.12.2019 [AN]

ENGLISH STORY

MARKS: 20

I. Answer the following

4 x 5 = 20

Who came out of the pond?	What is the moral of the story "An Honest Woodcutter"?
Who was watching the two cats from a tree?	Why did the monkey bite the cake?