

I. Multiple choice questions:

5x1=5

1. A floor map is a \_\_\_\_ shape.

- a) 2 - D      b) 3 - D      c) Cube      d) None



2.  $\frac{7}{10}$  can be written as \_\_\_\_.

- a) 0.6      b) 0.5      c) 0.7      d) 0.19

3.  $1\ell =$  \_\_\_\_  $m\ell$ .      a) 1000      b)  $\frac{1}{100}$       c) 100      d)  $\frac{1}{1000}$

4. The length between two points is called \_\_\_\_.

- a) Direction      b) Distance      c) Breadth      d) Route

5. If  represent 2 persons, then  represents \_\_\_\_ persons.  
a) 2      b) 4      c) 3      d) 6

II. Match the following:

5x1=5

6. 50 paise - 3 -D shape

7. 1m - 1

8.  $\frac{3}{10}$  - Rupee 0.50

9. Cube - 0.3

10.  $(9 - 1) \div 8$  - 100cm

III. Find out:

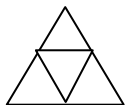
5x1=5

11. Is 246 is a special number? How?

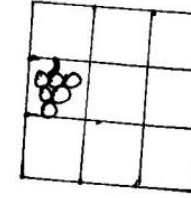
12. Draw any two shapes which will fold to make an closed box.

13. Subtract 10.231 from 12.34.

14. How many triangles are formed in the given figure?



15. Draw the given figure in 2cm grid.



IV. Solve any 5 of the following questions:

5x3=15

16. Convert into metres:

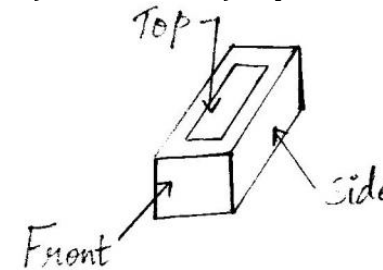
- a) 79 centimetres      b) 2metres and 15 centimetres

17. Solve:  $7.7 + 7.77 + 77.777$

18. Veena is working in China. She gets 1000 Yuan as salary. Find what is her salary in Indian rupees? (Hint: 1Yuan = Rs. 5.50)

19. Make drawings to show how the brick look like.

- a) Front view      b) Side view      c) Top view



20. Write the place value for 243.5.

21. Fill this square using all the numbers from 1 to 9.

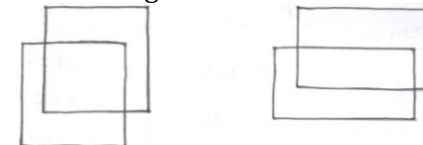
Rule: The total of each line is 15

|   |   |   |
|---|---|---|
| ? | ? | 6 |
| 9 | ? | ? |
| ? | 3 | 8 |

V. Answer any 2 of the following questions:

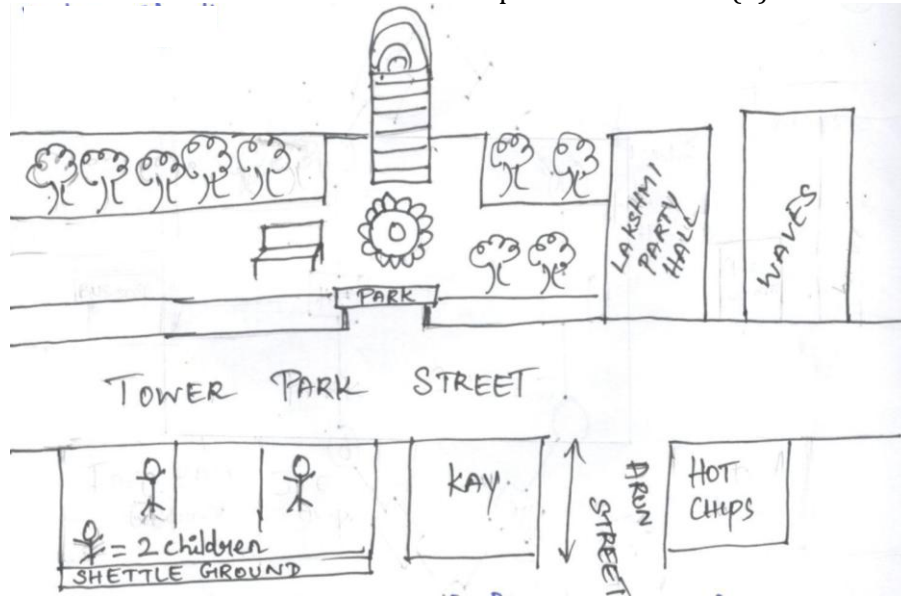
2x5=10

22. a) Join the corner of these figures and write the name of the solid. (3)



b) Convert 3.43 into fraction and write the place value of 4. (2)

23.



a) How many trees are inside the park?

b) In which direction tower is located.

c) Which building on this map is nearest to the park?

d) How many children are playing inside-the shuttle ground?

24. City Temperature at 6a.m

Chennai 34.05°C

Delhi 28.9°C

Gujarat 39.2°C

a) What is the difference between the temperature at 6am in Gujarat and Chennai?

b) Which place had the highest temperature at 6am?