

MATHS

I. Choose the correct answer:

3x1=3

1. 1 litre = _____.

- a. 1000 ml b. 100 ml c. 100 cl

2. A day has _____ hours.

- a. 24 b. 14 c. 12

3. $3 \times 4 =$ _____.

- a. 7 b. 12 c. 16

II. Fill in the blanks:

3x1=3

1. Factor x Factor = _____.

2. Repeated addition is called _____.

3. The short hand shows the _____.



III. Match the following:

$4 \times \frac{1}{2} = 2$

1. Height of a building - 100 paise
 2. $2+2+2+2$ - 28 days
 3. One rupee - 4×2
 4. February - Metre

IV. i. Observe the figure and fill in the blanks:

$2 \times 1 = 2$

a.  = ___ x ___ = ___ b.  = ___ x ___ = ___

ii. Write each repeated addition as multiplication factor:

$2 \times 1 = 2$

a. $5 + 5 + 5$ = ___ x ___ = _____. b. $2 + 2 + 2 + 2 + 2$ = ___ x ___ = ____.

V. i. Pictorial Representation:

$2 \times 1 = 2$

a.  = _____ x _____ = _____ b.  = _____ x _____ = _____

ii. Represent Pictorially:

$2 \times 1 = 2$

a. $3 \times 2 =$ b. $2 \times 4 =$

VI. i. Multiply [without carryover]:

$2 \times 1 = 2$

a.
$$\begin{array}{r} T \quad O \\ 1 \quad 0 \\ \times \quad 5 \\ \hline \end{array}$$
 b.
$$\begin{array}{r} T \quad O \\ 2 \quad 3 \\ \times \quad 3 \\ \hline \end{array}$$

ii. Multiply [with carryover]:

$2 \times 1 \frac{1}{2} = 3$

a.
$$\begin{array}{r} T \quad O \\ 2 \quad 5 \\ \times \quad 5 \\ \hline \end{array}$$
 b.
$$\begin{array}{r} T \quad O \\ 3 \quad 4 \\ \times \quad 4 \\ \hline \end{array}$$



VII. Word problem:



1x3=3

1. There are 15 Pencils in a box. Ravi bought 5 boxes. How many pencils are there in all?

VIII. i. Count and write:

2x1=2

a.  + 
 ₹ 20 + ₹ 15 = _____

b.  + 
 ₹ 30 + ₹ 40 = _____

ii. Write the following rupees and paise together:

2x½=1

a. 15 rupees 20 paise = _____. b. 40 rupees 25 paise = _____.

iii. Write the following amount of money in the long

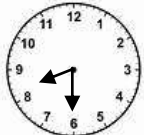
[EXPANDED] form.

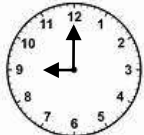
2x1=2

a. ₹20 . 75 p = _____ b. ₹ 35 . 00 p = _____

IX. i. Write the time shown in the clock.

2x1=2

a.  _____

b.  _____

ii. Draw the hands in the clock:

2x1=2

a. 3 : 30 b. 5 ' o Clock

X. Write 7 table.

1x2=2

XI. Multiple Choice Questions:

5x1=5

1. If today is Saturday, yesterday was _____.

- a. Monday b. Sunday c. Friday

2. When the minute hand is in 4 and the hour hand is in 7, the time is _____.




- a. 7 : 20 b. 4 : 35 c. 7: 04

3. $(\text{Rs. } 2) + (\text{Rs. } 1) + (\text{P. } 50)$

- a. Rs. 3. 50p b. Rs. 350 c. 300 paise

4. 4 metres = _____ centimetres

- a. 4000 b. 400 c. 40

5.   

- a. Three times 2 b. Two times 3 c. Three times 3