

EVERWIN VIDHYASHRAM
PERIODIC ASSESSMENT - 3

NAME : _____

LKG - _____

16.12.2019 [FN]

MATH WRITTEN

MARKS : 20

I. Write the numbers

8 x 1 = 8

| | | | | | | | | | |
|----|--|--|--|--|--|--|--|--|----|
| 21 | | | | | | | | | 30 |
|----|--|--|--|--|--|--|--|--|----|

II. Write the after numbers

4 x 1 = 4

| | | | | | | | |
|---|--|---|--|---|--|---|--|
| 5 | | 8 | | 2 | | 9 | |
|---|--|---|--|---|--|---|--|


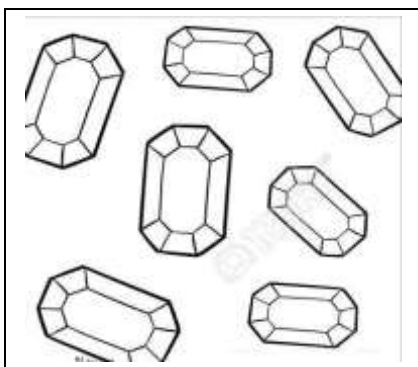
III. Write the between numbers

2 x 1 = 2

| | | | | | |
|---|--|---|---|--|---|
| 1 | | 3 | 7 | | 9 |
|---|--|---|---|--|---|

IV. Count and write the correct number

3 x 1 = 3

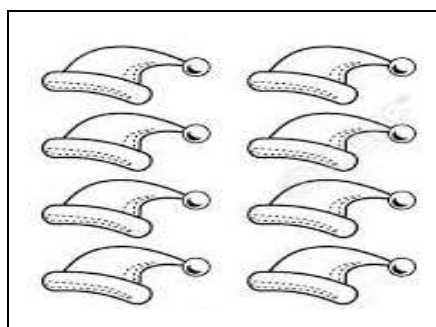


V. Count and circle the correct number


2 x 1 = 2

VI. Draw a circle

[1M]



| | | |
|---|---|----|
| 8 | 9 | 10 |
|---|---|----|



| | | |
|---|---|----|
| 8 | 9 | 10 |
|---|---|----|

| |
|--|
| |
|--|

EVERWIN VIDHYASHRAM
PERIODIC ASSESSMENT - 3



NAME: _____


LKG - _____

16.12.2019 [AN]

MATH ORAL

MARKS: 10

| Identify the concept MORE [2½ M] | Identify the concept OUT [2½ M] |
|---|--|
|  |  |



Recite the numerals
51 to 60
[5 Marks]