

EVERWIN VIDHYASHRAM  
HALF-YEARLY ASSESSMENT

NAME: \_\_\_\_\_

LKG - \_\_\_\_\_

18.09.2019

MATH WRITTEN

40 Marks

I. Number Dictation

5 x 1 = 5

a	
---	--

b	
---	--

c	
---	--

d	
---	--

e	
---	--


II. Write the numerals 1 - 10

10 x 1 = 10


--	--	--	--	--	--	--	--	--	--

III. Count and write the correct number

2 x 3 = 6




--



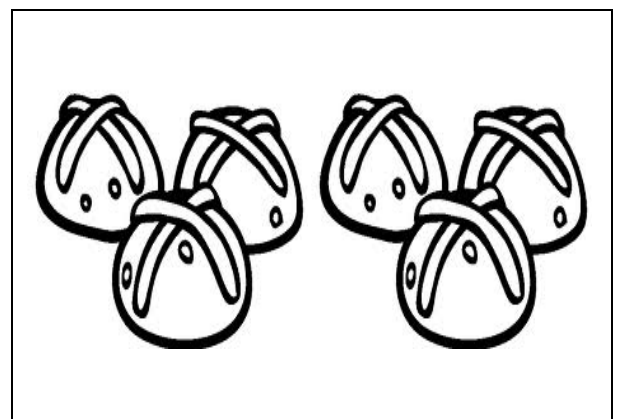
--

IV. Count and circle the correct number

2 x 2 = 4



1	2	3
---	---	---



6	7	8
---	---	---

V. Write the missing numbers

$5 \times 1 = 5$

1	2				6	7	8		
---	---	--	--	--	---	---	---	--	--

VI. Match the following

$5 \times 2 = 10$

The matching exercise contains the following items:

- Left side: suitcase, palm tree, two identical cartoon girls, the number 6, and a wooden wheel.
- Right side: two identical cartoon girls, a gray square, a small plant with roots, a circle, and five wrapped candies.