

EVERWIN VIDHYASHRAM  
HALF YEARLY ASSESSMENT

16.09.2019

STD I \_\_\_\_\_

MATHS

MARKS: 80

NAME: \_\_\_\_\_

ROLL NO: \_\_\_\_\_

I. Write the numerals:

4

475	476	477	478	479
480	481	482	483	484

II. A. Missing numbers:

$4 \times 1\frac{1}{2} = 6$

a. 344, 345, 346, 347.

b. 115, 116, 117, 118.

c. 277, 278, 279, 280.

d. 493, 494, 495, 496.

B. Write the number names:

$4 \times 2 = 8$

a. 18 - Eighteen.

b. 100 - One hundred.

c. 46 - Forty six.

d. 35 - Thirty five.

III. A. Write in Ascending order:

$2 \times 1\frac{1}{2} = 3$

i. 17, 8, 28

Ans: 8, 17, 28.

ii. 32, 48, 21

Ans: 21, 32, 48.

B. Circle the smallest numbers:

$3 \times 1 = 3$

a. 11, 3, 42

b. 25, 34, 18

c. 8, 32, 36

IV. A. Write in descending order:

$2 \times 1\frac{1}{2} = 3$

i. 18, 45, 36 - 45, 36, 18

ii. 22, 44, 42 - 44, 42, 22

B. Circle the biggest numbers:

3x1=3

a. 12, 7, **19**

b. 14, **33**, 21

c. 20, **50**, 40

C. Write the backward numbers:

4

25	24	23	22	21
20	19	18	17	16

V. Write the before, after & between numbers:

5x1=5

a. 18, **19**.

b. 83, **84**, 85.

c. **61**, 62.

d. 56, **57**, 58.

e. **48**, 49.

VI. Comparison of numbers: (<, > or =)

5x1=5

a. 41 **>** 28

b. 30 **=** 30

c. 23 **<** 32

d. 45 **<** 50

e. 16 **=** 16

VII. Write table - 3:

(5)

$3 \times 1 = 3$	$3 \times 6 = 18$
$3 \times 2 = 6$	$3 \times 7 = 21$
$3 \times 3 = 9$	$3 \times 8 = 24$
$3 \times 4 = 12$	$3 \times 9 = 27$
$3 \times 5 = 15$	$3 \times 10 = 30$

VIII. A. Skip counting by 2's:

$6 \times \frac{1}{2} = 3$

a. 17, 19, 21, 23.

b. 4, 6, 8, 10.

c. 18, 20, 22, 24.

B. Skip counting by 3's.

$6 \times \frac{1}{2} = 3$

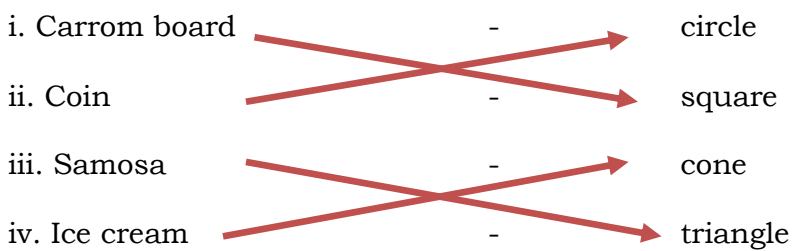
a. 9, 12, 15, 18.

b. 26, 29, 32, 35.

c. 12, 15, 18, 21.

IX. A. Match the following:

$4 \times 1 = 4$



B. Draw the shapes:

$3 \times 1 = 3$

i. Oval

=



ii. Triangle

=



iii. Cylinder

=



X. Addition:

$4 \times 2 = 8$

a. 5

b. 7

c. 3 6

d. 4 3

$$\begin{array}{r} 5 \\ + 1 \\ \hline 6 \end{array}$$

$$\begin{array}{r} 7 \\ + 0 \\ \hline 7 \end{array}$$

$$\begin{array}{r} 3 \\ + 2 \\ \hline 3 \quad 8 \end{array}$$

$$\begin{array}{r} 4 \\ + 2 \\ \hline 6 \quad 3 \\ 3 \\ \hline 6 \quad 5 \end{array}$$

XI. Word problem:

$1 \times 5 = 5$

1. Ram has 6 balloons and Raju has 3 balloons. How many balloons are there in all?

No. of balloons Ram has = 6

No. of balloons Raju has = + 3

Total no. of balloons = 9


2. Renu has 5 pencils and Reema has 2 pencils. How many pencils are there in all?

$$\begin{array}{rcl} \text{No. of pencils Renu has} & = & 5 \\ \text{No. of pencils Reema has} & = & + 2 \\ \hline \text{Total no. of pencils} & = & 7 \\ \hline \end{array}$$

XII. Multiple Choice Questions:

5x1=5

1. Complete the pattern:




- a.       b.       c. 

2.  $5 + \underline{\hspace{2cm}} = 5$ .

- a. 0      b. 5      c. 1

3. How many Triangles are there in the given picture.



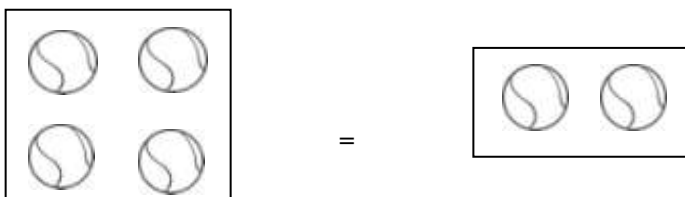
- a. 5      b. 6      c. 4

4. Choose the correct symbol for the following:

$$4 + 1 \quad \square \quad 5 + 1$$

- a. >      b. <      c. =

5. If you want to make these balls to be equal on both sides. How many more you need?



- a. 2 balls      b. 3 balls      c. 4 balls