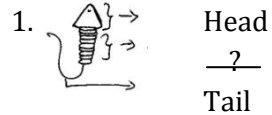



I. Answer in one word:

6x½=3



2.  I am a gland. Who am I?

3. \_\_\_\_\_ can be beaten into thin sheets.

4. The planet which appears reddish in colour is \_\_\_\_\_.

5. Ovum is fertilised in the \_\_\_\_\_.

6. Fertilisation results in the formation of \_\_\_\_\_.

II. Answer in short: (Any 4)

4x2=8

7. Name the human gonads.

8. Mention the uses of artificial satellite.

9. What is meant by endocrine glands?

10. Define alloy.

11. Complete the equation. a)  $C + O_2 \rightarrow ?$       b)  $CO_2 + H_2O \rightarrow ?$

12. What is metamorphosis?

III. Answer in a paragraph: (Any 3)

3x3=9

13. Distinguish between zygote and a foetus.

14. What is a test - tube baby?

15. Write a note on viviparous and oviparous animals.

16. a) Do all the stars in the sky move?

b) What is a constellation? Name any two constellation?

17. State the uses of non - metals.

IV. Answer in detail: (Any 1)

1x5=5

18. a) Compare the physical properties of metals and non - metals.

(OR)

b) Explain how you can locate the pole star with the help of Ursa Major.

(OR)

c) How sex is determined in the unborn baby?

I. Answer in one word:

6x½=3

1. In pasteurization the milk is heated to about \_\_\_\_\_ °c.

2. Yeast multiplies by a process called \_\_\_\_\_.

3. The types of the vehicle are treaded to \_\_\_\_\_ the friction.

4. Calorific value of petrol is \_\_\_\_\_.

5. Shrillness of a sound is determined by the \_\_\_\_\_ of vibration.

6. A liquid fuel, used in home is \_\_\_\_\_.

II. Answer in short: (Any 4)

4x2=8

7. What are antibiotics?

8. What is friction? What are the two properties of friction?

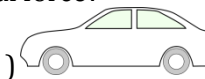
9. Explain how CO<sub>2</sub> is able to control fires.

10. Write the difference between noise and music.

11. What is ignition temperature?

12. Show the direction of frictional force?

(Direction of movement of car )



III. Answer in a paragraph: (Any 3)

3x3=9

13. Differentiate food preservation and food poisoning.

14. Which zone of a flame does a goldsmith use for melting gold and silver and why?

15. Mention the methods to reduce friction?

16. List sources of noise pollution in your surroundings.

17. Mention some common human diseases with mode of transmission caused by microorganism.

IV. Answer in detail: (Any 1)

1x5=5

18. What are the major groups of micro organisms? Explain with diagram.

19. Explain the function of larynx.

20. What is combustion? Explain the type of combustion.

03.09.2019 EVERWIN VIDHYASHRAM Marks: 25  
STD: VIII HYA - COMPREHENSIVE REVISION PROGRAMME Time: 1hr  
[FN] (Awe, Cap, Conf, Ene) ENGLISH (PART - I)

I. Write the synonyms of: 2x1=2

1. Reluctant - 2. Ecstasy -

II. Write the antonyms of: 2x1=2

3. Dignify X 4. Dare X

III. Frame sentence: 1x1=1

5. Odour -

IV. Answer with reference to context: 1x2=2

6. "She wrapped her trunk around a sisal pole and pulled".

a) Who wrapped her trunk around a sisal pole?

b) Give the meaning of the word 'Sisal'.

V. Answer in short: (Any 2) 2x1½=3

7. What was near ecstasy for the raiders?

8. How does the narrator feel about elephants compassion or disgust?

9. Who was the eight one to walk through the banana plantation? Why was he not excited?

VI. Answer in paragraph: (Any 1) 1x3=3

10. Write a few traits that best describe Tuskless.

11. Write a paragraph on the initial experience of the narrator's West - African trips.

VII. Answer in detail: (Any 1) 1x4=4

12. Explain how the elephants entered the kitchen and how did Tuskless manage to get food out of the tent?

13. Give an account of MacTootle's meeting with the narrator before he left to England.

VIII. Grammar:

14. Fill in the blanks by choosing the correct options give below: 6x½=3

a) There was \_\_\_\_\_ moisture in the room.

b) Did you try to \_\_\_\_\_ the door without the key?

c) The cake was too hot to \_\_\_\_\_.

(eat, the whole of, open, most of, a good deal of)

15. Match the first part of the sentence with the second:

a) For every action - Stranger than fiction

b) Earth is the - There is an equal and opposite reaction

c) Truth is - Third planet from the sun.

IX. Literature Reader: 4x½=2

16. I want to tell you about \_\_\_\_\_, my \_\_\_\_\_ pet sloth bear. I got him for her by accident. Two years ago, we were passing through the \_\_\_\_\_ near \_\_\_\_\_.

X. Prose comprehension: 3x1=3

'I know all about the game'. The man told. 'The boys are brothers, my sons.' He pointed to a handsome brown woman on the verandah who had just come out to call in the children. 'That's my wife,' he said.

Questions:

a) Who are the boys referred here?

b) To whom does he man explain all the things?

c) How is the woman related to the man?

03.09.2019 EVERWIN VIDHYASHRAM Marks: 25  
STD: VIII HYA - COMPREHENSIVE REVISION PROGRAMME Time: 1hr  
[AN] (Awe, Cap, Conf, Ene) ENGLISH (PART - II)

- I. Write the synonyms of:  $2 \times 1 = 2$
1. Expectant -
  2. Ledge -
- II. Write the antonyms of:  $2 \times 1 = 2$
3. Frenzy X
  4. Uncanny X
- III. Frame sentence:  $1 \times 1 = 1$
5. Weeping -
- IV. Answer with reference to context:  $1 \times 2 = 2$
6. "The animals were muzzled so that they wouldn't help themselves to the straw".
    - a) Why were the animals muzzled?
    - b) What does the word 'muzzled' mean?
- V. Answer in short: (Any 2)  $2 \times 1\frac{1}{2} = 3$
7. Why was the narrator furious – can it be justified?
  8. What kind of contrast does the poet create in the first stanza through the image of nature?
  9. When did Helen feel regret and sorrow for the first time?
- VI. Answer in paragraph: (Any 1)  $1 \times 3 = 3$
10. What socio – economic strata did the narrator belong to and how was she different from others who faced discrimination?
  11. Write a paragraph to show that Anne Sullivan was a great teacher.
- VII. Answer in detail: (Any 1)  $1 \times 4 = 4$
12. Mention an incident in the text which proves that Helen's parents were overindulgent towards her and how did it influence her?
  13. What humiliation did the lower castes had to face?

VIII. Grammar:  $6 \times \frac{1}{2} = 3$

14 Fill in the blanks with simple past (or) present perfect tense of the verbs given in the brackets:

- a) Stephen \_\_\_\_ his studies three years ago. (Finish)
- b) Jay \_\_\_\_ to Australia last year. (Emigrate)
- c) Jay \_\_\_\_ us to visit him. (Invite)

15. Choose the correct alternatives and fill in the blanks:

- a) Students \_\_\_\_ (will/ should) greet the teachers when they meet them.
- b) Students \_\_\_\_ (will/ must) be punctual and regular in their attendance.
- c) Students \_\_\_\_ (have to / can) be responsible for their possessions.

IX. Literature Reader:  $5 \times \frac{1}{2} = 2\frac{1}{2}$

16. Swami realized with a shudder that it was \_\_\_\_ morning.
17. Swami was lying on the bench in \_\_\_\_ room.
18. Who scolded Swami for not getting up and being ready for school?
19. \_\_\_\_ was teaching Arithmetic.
20. Did Swami deliver the letter to the Headmaster?

X. Notice writing:  $1 \times 2\frac{1}{2} = 2\frac{1}{2}$

24. You are the head of the Music Department of XXX school. Write a notice regarding the upcoming singing competition in the school. The maximum word limit is 50.

03.09.2019 EVERWIN VIDHYASHRAM Marks: 25  
STD: VIII HYA - COMPREHENSIVE REVISION PROGRAMME Time: 1hr  
[FN](Ele, Fant) SOCIAL (PART - I)

- I. Answer in one word: 5x1=5
1. \_\_\_ is the symbol of power and authority, a British word for rich persons.
  2. \_\_\_ is the seasonal migration of herders from plains to hillside and vice versa.
  3. The highest law making body of the country consisting of Lok Sabha and Rajya Sabha is \_\_\_\_\_.
  4. \_\_\_ are Sufi lodges used as rest houses.
  5. \_\_\_ is the process of digging out of minerals from shallow depths under the surface

II. Answer in short: (Any 3) 3x2=6

1. What is an alloy?
2. Name different types of towns on the basis of their functions.
3. What does violation of law invite?
4. What was the key aspect of company's Policy from 1757 to 1857?

III. Answer in paragraph: (Any 2) 2x3=6

1. Describe the lives of tribal people who were hunters and gatherers.
2. What type of document is our Constitution?
3. Describe tidal energy.

IV. Answer in detail (any 1) 1x4=4

1. Explain the major features of the 'Doctrine of Lapse'.
2. Give the distribution of minerals in India.

V. Value Based Question: 1x2=2

1. Write 4 laws of India.

VI. Mark the following on the map: 4x½=2

1. Banjaras
2. Koya Banjara
3. Van Gujjar
4. Santhal

03.09.2019 EVERWIN VIDHYASHRAM Marks: 25  
STD: VIII HYA - COMPREHENSIVE REVISION PROGRAMME Time: 1hr  
[AN](Ele, Fant) SOCIAL (PART - II)

I. Fill in the blanks: 5x1=5

1. \_\_\_ waste is the land which has remained waste for years together because it has become infertile.
2. The situation when the soldiers as a group disobey the orders if their officers in the army is termed as \_\_\_\_\_.
3. \_\_\_\_\_ means to force someone to do something.
4. Resources which are found everywhere are called \_\_\_\_\_.
5. Control over a country is known as \_\_\_\_\_.

II. Answer in short: (Any 3) 3x2=6

1. On the basis of origin, classify natural resources.
2. How did the historians divide the Indian History?
3. Enumerate fundamental rights given in the constitution of India.
4. What is colonisation?

III. Answer in paragraph: (Any 2) 2x3=6

1. What were the characteristics of the Constituent Assembly?
2. What are human resources? How are they developed?
3. What are the other sources of describing histories?

IV. Answer in detail (any 1) 1x4=4

1. What measures did the company adopt to reform the Indian Society? How did the Indian react to this?
2. Write any two key features of the Indian Constitution.

V. Value Based Questions: 1x2=2

1. Write any two points about land as a resource.

VI. Mark the following on the map: 4x½=2

1. West Bengal
2. Orissa
3. Madhya Pradesh
4. Tamil Nadu

SECTION - A

I. Multiple choice questions: 5x1=5

- Solve  $x + 5 = 15$ .  
 a)  $x = 20$     b)  $x = 10$     c)  $x = 25$     d)  $x = 5$
- Name the regular polygon of 3 sides \_\_\_\_\_.  
 a) Equilateral triangle    b) Square  
 c) Isosceles triangle    d) None of the above
- Which of the following is not a linear equation in one variable \_\_\_\_.  
 a)  $x + y - 2 = 0$     b)  $2x + 5 = 11$     c)  $4x = 15$     d)  $5x = 7$
- The sum of the measures of the external angles of any polygon is \_\_\_\_.  
 a)  $270^\circ$     b)  $120^\circ$     c)  $150^\circ$     d)  $360^\circ$
- A simple closed curve made up of only line segments is called \_\_\_\_.  
 a) Polygon    b) Convex    c) Concave    d) None of the above

SECTION - B

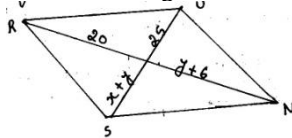
II. Answer the following: 3x2=6

- Explain why rectangle is a convex quadrilateral.
- Solve:  $7x - 15 = 3x + 5$ .
- Write any two properties of square.

SECTION - C

III. Answer the questions: 2x3=6

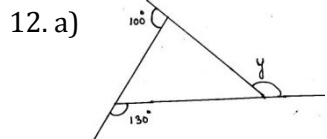
- Three consecutive numbers added upto 75. Find the numbers.
- RUNS is a parallelogram find  $x$  and  $y$ .



SECTION - D

IV. Answer the following: 2x4=8

- The ages of Anjali and Malti are in the ratio 3 : 4 Eight years later the sum of their ages will be 44 years. What are their present ages.



Find  $y$  the from the above figure.

- The sum of the measures of interior angles of a quadrilateral is \_\_\_\_\_.

I. Write the synonyms: 2x1=2

- Curvaceous -    2. Desolate -

II. Write the antonyms of: 2x1=2

- Former X    4. Segregate X

III. Frame sentence: 1x1=1

- Vast -

IV. Answer with reference to context: 1x2=2

6. But America has failed to pay on this promissory note to her citizens of colour.

- Who are the citizens of colour?
- What s the promissory note referred to in the given line.

V. Answer in short: (Any 2) 2x1½=3

- What is Dr. King's dream for his four children?
- What should be our attitude towards our work?
- What message is the poet trying to convey?

VI. Answer in paragraph: (Any 1) 1x3=3

10. How does King illustrate America's broken promise and what does he compare it to?

11. What is Dr. King's purpose in giving this speech?

VII. Answer in detail: (Any one) 1x4=4

12. Was Martin Luther King a powerful speaker? Write a few thought provoking lines from his famous speech 'I have a dream'.

13. What were the African - American deprived of?

VIII. Literature Reader: Fill in the blanks: (3)

14. After a few days, the narrator met the \_\_\_\_ and expected a warm \_\_\_\_.

15. \_\_\_\_ their caretaker passed away.

16. Both girls felt \_\_\_\_ over his death.

17. There was no match between the old man he saw and the \_\_\_\_ in the album.

IX. Grammar: (3)

18. The lady \_\_\_\_ visit two regional offices next week. (Use future continuous tense) (½)

19. The meeting \_\_\_\_ (start) at 4'O clock tomorrow. (Use simple future) (½)

20. Draw the curtains. Get more light. (Combine these two sentences using 'if' and the right verbs) (1)

21. She must send another email to them.(Change the voice into passive)(1)

X. Write a paragraph on: 1x2=2

'How to manage your time'.