


27.09.2019	EVERWIN VIDHYASHRAM	Marks: 25
STD: V	HYA-COMPREHENSIVE REVISION PROGRAMME	Time: 1hr
[FN]	ENGLISH (PART – I)	
(Act, Amz, Att, Bri, Chee, Cre, Cute, Ele, Emi, Ener, Fasc, Plea)		
I. Synonyms:		2x1=2
1. Destroy -	2. Companion -	
II. Antonyms:		2x1=2
1. Possible X	2. Empty X	
III. Frame sentences:		1x1=1
1. Spread -		
IV. Annotation:		1x2=2
1. "When they come back in the evening, I shall catch them."		
a) Who said this to whom?		
b) Why did he say this?		
V. Quote from memory:		1x4=4
1. The first 4 lines of the poem "TEAM WORK".		
VI. Answer the following briefly: (Any 2)		2x2=4
1. Where did the geese live?		
2. Where did Rip Van Winkle live?		
3. Whom do you think your shadow looks like?		
VII. Answer the following in paragraph:		1x3=3
1. Depict the story of "Flying Together".		
VIII. Literature: Fill in the blanks:		2x1=2
1. Mr. Whale and Mr. Elephant planned out to ___ over all the animals.		
2. Mr. Whale and Mr. Elephant began to ___ the rope.		
IX. Grammar: Do as directed:		10x½=5
1. Underline the subject: New Delhi is the capital of India.		
2. Choose the suitable answers:		
a) We are having a fete <u>at school</u> (Phrase / Clause)		
b) Is that bag <u>yours</u> ? (Possessive pronoun / possessive adjective)		
c) Identify the adjective: <u>Which</u> dress shall I wear? (interrogative / emphatic adjective)		
d) Complete the sentences using adjective: ___ books are these? (Which / Whose)		
3. Fill in the blanks:		
a) I had __ been to a wildlife sanctuary before last summer. (Already/never)		
b) ___ I had never seen a snake. (Not yet, Until that day)		
4. Select the suitable adverb:		
a) We shall ___ start Walking (Now / late)		
b) He was singing ___ (few / softly)		
5. Complete the sentence with correct order of adjectives:		
a) ___, ___, ___ men came on the stage (young, three, tall)		

27.08.2019	EVERWIN VIDHYASHRAM	Marks: 25
STD: V	HYA-COMPREHENSIVE REVISION PROGRAMME	Time: 1hr
[AN]	ENGLISH (PART – II)	
(Act, Amz, Att, Bri, Chee, Cre, Cute, Ele, Emi, Ener, Fasc, Plea)		
I. Synonyms:		2x1=2
1. Vain -	2. Footprint -	
II. Antonyms:		2x1=2
1. Forward X	2. Wise X	
III. Frame sentences:		1x1=1
1. Investigate -		
IV. Annotations:		1x2=2
"His poor old mother calls in vain. "Come in and help!" he does not bother"		
a) Whom does the word 'he' refer to?		
b) Why did his mother call him?		
V. Write first four lines from the poem – Crying.		1x4=4
VI. Answer the following: (Any two)		2x2=4
1. What did the frog do all day?		
2. What are the things that Munna liked to do?		
3. What made Robinson Crusoe think that the print on the ground was a footprint?		
VII. Fill in the blanks with suitable words: [Literature]		2x1=2
1. ___ ran upstairs to Jessie's room.		
2. Tia helped ___ to overcome her grief.		
VIII. Notice writing: (Lexical Skill)		1x3=3
You are the head girl / boy of your school. Your school is going to organize an Inter-school singing competition. Write a notice for your school notice board inviting names of all the interested students.		
IX. Grammar:		10x½=5
Choose the correct answer:		
1. They are eating their ___ [food / foods]		
2. ___ Nile is ___ longest river in Africa. [a, an, the]		
3. ___ children watched ___ film yesterday. [a, an, the]		
4. Would you like <u>to draw</u> a picture? [Identify if the underlined verb is gerund, participle, infinitive]		
5. This book belongs to me. It is <u>mine</u> . [Demonstrative pronoun / Possessive pronoun]		
6. Use a suitable pronoun: Aunt Lara took ___ to the market.		
7. Use a collective noun: He stepped on a ___ of ants in the garden.		
8. The food inspector wants to check the ___ of our kitchen. [abstract noun]		

I. Multiple choice questions: 5x1=5

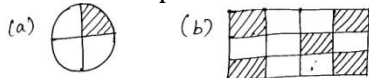
- A square has ___ line a symmetry.
 a) 4 b) 6 c) 3 d) Infinite
- A line of symmetry divides a figure into ___ halves.
 a) Two b) Three c) Four d) Zero
- Like fractions have ___ denominator.
 a) Same b) Different c) Different & Same d) Both a & b
- A part of a whole is a ____.
 a) Fraction b) Numerator c) Denominator d) None of these
- ___ letter has the horizontal line symmetry.
 a) J b) K c) T d) A

II. Match the following: 5x1=5


-  - 9
- Mixed fraction - Vertical line of symmetry
- 50 paise + 50 paise - 1001
- $\frac{3}{5} \times 15$ - whole number + proper fraction
- Mirror numbers - ₹1

III. Solve: 3x2=6

- Find first 2 equivalent fraction $\frac{2}{4}$.
- Divide the images into two equal halves (a) B b)
- Find the fraction for the shaded parts.



IV. Word Problems: (Any 3) 3x3=9

- Draw $\frac{1}{4}$ turn and $\frac{1}{2}$ turn for the following shapes.
 a)  b) c)
- Look at the shopping list in Sai's hand. How much will he have to pay to buy all of these?

Item	Price in Rs. (Per Kg)	Amount
Carrot 1 Kg	₹30	
Brinjal 2½ Kg	₹10	

16. Complete the picture according to the fraction



17. A gatekeeper gets 500 gold coins as gift what will be the two - fifth of it?

I. Multiple choice questions: 5x1=5

- Multiples of 2 are _____ numbers.
 a) Odd b) Even c) Prime d) None of these
- ___ is the smallest odd composite number.
 a) 2 b) 3 c) 4 d) 9
- _____ is neither a prime nor a composite number.
 a) 0 b) 1 c) 2 d) 3
- The number which is divisible by 1 and the number itself is called ____ number.
 a) Even b) Odd c) Prime d) Composite
- ___ is the only even prime number.
 a) 5 b) 4 c) 2 d) 3

II. Match the following: 5x1=5

- HCF × LCM - Unique number
- Factors of 9 - 4
- Smallest composite number - Least common multiple
- 1 - 1, 3, 9
- LCM - Product of the numbers

III. Solve the following: 3x2=6

- Write the first six multiples of 4.
- Find the factors of 15.
- Write the common factors of 6 and 8.
- Solve the word problems: (Any 3) 3x3=9
- If the cat starts from the 4th step and jumps four steps at a time and the mouse starts from the 3rd step and jumps three steps at a time, if the mouse reaches 27th step it can hide in the hole. Find out whether the mouse can get away safely?
- Find the LCM of 15 and 24.
- Find the first three common multiples of 5 and 10.
- Draw a factor tree for 28.

27.08.2019 EVERWIN VIDHYASHRAM Marks: 25
STD: V HYA-COMPREHENSIVE REVISION PROGRAMME Time: 1hr
[FN] (Attr, Fab, Glo, Inte, Won) EVS (PART - I)

I. Fill in the blanks: 3x1=3

1. ____ was the first man to walk on the moon.
2. When two liquids cannot be combined it is called ____.
3. Paths on mountain are uneven rocky and ____.

II. Write true or false: 4x½=2

1. Mountains are full of dangerous rivers, deep valleys, irregular surface.
2. The moon rises at the same time everyday.
3. Oil mixes with water.
4. The gravitational force of the earth attracts everything towards itself.

III. Answer any 4 of the following in short: 4x2=8

1. What is a Universe?
2. Who are called Mountain Climbers?
3. Why is water called the Universal Solvent?
4. What is a globe?
5. Define Density.

IV. Answer any 2 of the following in paragraph: 2x4=8

1. Define matter and its types with neat diagram.
2. Explain, what did Sunita Williams mean to say "All the lines on the map are made by us they are in our mind only".
3. Write about mountains? Name some highest mountains in the world.

V. Write the scientific term: 2x1=2

1. Snow storm -
2. Satellite -

VI. Value Based Questions: 2x1=2

1. When we throw a ball up in the air. What happens? Why?
2. What happens on adding salt to the water in which eggs are boiled? Why?

27.08.2019 EVERWIN VIDHYASHRAM Marks: 25
STD: V HYA-COMPREHENSIVE REVISION PROGRAMME Time: 1hr
[AN] (Attr, Fab, Glo, Inte, Won) EVS (PART - II)

I. Fill in the blanks: 3x1=3

1. ____ is essential for life.
2. Digestion begins in the ____.
3. Fishes give alarm call by _____.

II. Write true or false: 4x½=2

1. Sloths live for about 40 years.
2. Water on the earth is for one and all.
3. Lemon is sour in taste.
4. Our sense of smell and taste are not interlinked.

III. Answer any 4 of the following in short: 4x2=8

1. Define reflex action.
2. What are endangered species?
3. Write two ways of water storage in olden days?
4. Define proper food.
5. What is Ghadsisar?

IV. Answer in paragraph: (Any 2) 2x4=8

1. Who are hunters and poachers? Why do they poach animals?
2. Explain any two different methods used to conserve water in olden days?
3. How the digestion begins in the mouth. Explain.

V. Scientific term: 2x1=2

1. Sense organs -
2. Chabutaras -

VI. Value Based Questions: 2x1=2

1. Name a liquid or frozen water that falls from the sky.
2. What will happen if you do not take food properly?

27.08.2019 EVERWIN VIDHYASHRAM Marks: 25
STD: V HYA-COMPREHENSIVE REVISION PROGRAMME Time: 1hr
[FN] (Majestic) L3 TAMIL

I. பொருள் கூறுக: 2x1=2

1. குட்டை - 2. நிறைய -

II. பிரித்து எழுதுக: 4x½=2

3. செள - 4. கை - 5. மே - 6. தா -

III. சேர்த்து எழுதுக: 4x½=2

7. த் + ஏ - 8. ண் + ஐ - 9. வ் + இ - 10. ர் + ஊ -

IV. எண்களை எழுத்துகளால் எழுதுக: 2x1=2

11. 9 12. 20

V. விடுப்பட்ட எழுத்தை எழுதுக: 4x½=2

13. ரு யாய் 14. கோ க்காய் 15. முருங்கைக் ய்

16. கத் ரிக்காய்

VI. படத்தைப் பார்த்து பெயர் எழுதுக: 3x1=3

17.  18.  19. 

VII. வரிசைப்படுத்தி எழுதுக: (வாரத்தின் நாட்கள்) (1)

20. சனி, திங்கள், வெள்ளி, புதன், ஞாயிறு, வெள்ளி, செவ்வாய்.

VIII. தமிழாக்கம்: 3x1=3

21. Facebook - 22. WhatsApp - 23. Internet -

IX. பொருத்துக: 4x½=2

24. ஒலி - கடல்

25. ஒளி - சத்தம்

26. அலை - கூப்பிடு

27. அழை - வெளிச்சம்

X. வினா விடை: 3x2=6

28. மூவெழுத்துச் சொற்கள் எவையேனும் நான்கினை எழுதுக?

29. கத்திரிக்காய் எப்படி இருக்கும்?

30. குட்டி குட்டியாக இருக்கும் காய் எது?

27.08.2019 EVERWIN VIDHYASHRAM Marks: 25
STD: V HYA-COMPREHENSIVE REVISION PROGRAMME Time: 1hr
[FN] (Marvellous) L3 HINDI

I स्वर लिखिए 2x1=2

अ आ - - - - - अः

II व्यंजन लिखिए 4x½=2

क ख - - ड.

ट - ड - ण

III वारुखडी लिखिए 2x1=2

1) क 2) न

IV वारीं के नाम लिखिए 2x1=2

1) Monday - 2) गुरुवार -

V गिनती लिखिए 3x1=3

1. तीन -

2. छे -

3. नौ -

VI विलोम शब्द लिखिए 3x½=1½

1. देना x 2. गरम x 3. अंदर x

VII लिंग बदलिए 3x½=1½

1. देव - 2. घोड़ा - 3. सखा -

शा रंगों के नाम लिखिए

2x1=2

1. नीला -

2. लाल -

ख प्रत्यय लिखिए

2x1=2

काल → दूध
→ सब्जी

ख समान अर्थवाले शब्द लिखिए

4x1/2=2

1. जग -

2. जान -

3. बाज -

4. नरम -

ख पंचभूत लिखिए

3x1/2=1 1/2

1. Water -

2. वायु -

3. पृथ्वी -

ख पक्षियों के नाम लिखिए

4x1/2=2

1. मोर -

3. Myna -

2. Parrot -

4. नीयल -

ख क्रियाएँ लिखिए

3x1/2=1 1/2

1. चलना -

2. आना -

3. खाना -