

NAME : _____

UKG - _____

18.07.2019

MATH WRITTEN

MARKS : 40

I. Write the numerals (41 – 50)

10 x ½ = 5

--	--	--	--	--	--	--	--	--	--

II. Write the missing numbers

7 x 1 = 7

31	32							39	
----	----	--	--	--	--	--	--	----	--

III. Write the Number Names

4 x 1 = 4

3	

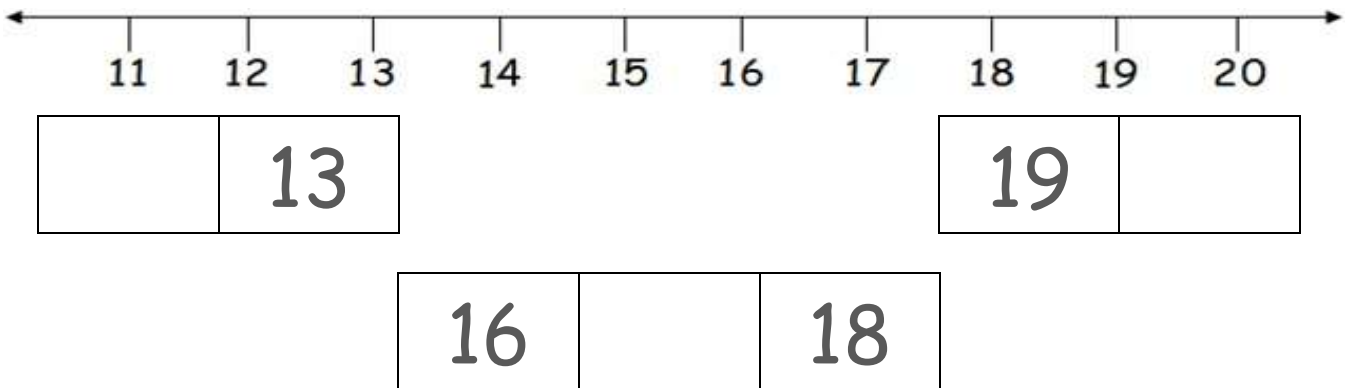
1	

7	

9	

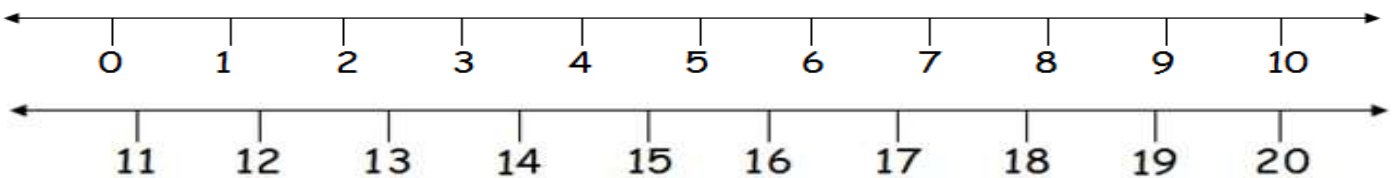
IV. Write Before, After and Between Number

3 x 1 = 3



V. Using the number line write in Ascending order

2 x 5 = 10



7	9	8	6	10
---	---	---	---	----


19	2	10	16	5
----	---	----	----	---




--	--	--	--	--

--	--	--	--	--

VI. Match the following

4 x 1 = 4

eight 

five   

VII. Backward counting – Write the missing numbers

8 x ½ = 4

10 ○ 8 ○ ○ ○ ○ ○ ○ 2 ○ ○

VIII. Place Value – Split and write the numbers according to their value

4 x 1 = 4

Number	Tens	Ones
36		
52		
18		
25		