

07.11.2019

EVERWIN VIDHYASHRAM

STD: V - VI



THINKING SKILL CAMP - 2



Time: 1 hr

1. "Dogs" is related to "Bark" in the same way "Goats" is related to?

- a) Bleat
- b) Crow
- c) Grunt
- d) Howl

2. Guess the word:

i)  +  = _____ Ans: Face Book

ii)  +  = _____ Ans: Rainbow

3. I am greater than 12 and less than 18, I am even. When you double 8, you will not get me what number am i? Ans: 14

4. If the day before yesterday was Saturday, what day will fall on the day after tomorrow?

- a) Friday
- b) Tuesday
- c) Thursday
- d) Wednesday

5. Arrange the words given below in a meaningful sequence.

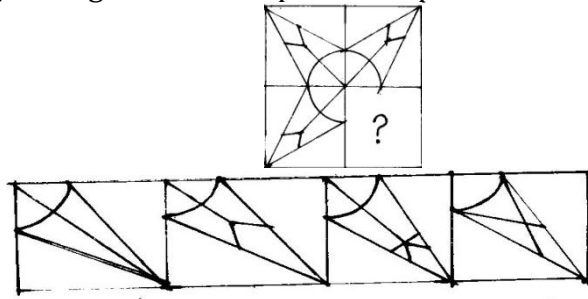
- i) Police
- ii) Punishment
- iii) Crime
- iv) Judge

v) Judgement
Ans: 3, 1, 4, 5, 2

6. Find the odd one out:

- a) 27
- b) 37
- c) 47
- d) 67

7. Identify the figure that completes the pattern.



a) b) c) d) Ans: b

8. What have hands but cannot clap? Ans: Clock

9. In some months there are 31 days, in other month there are 30. But how many months, have 28 days?

Ans: All 12 months

10. Which letter is exactly midway between G and Q in the given alphabets? A B C D E F G H I J K L M N O P Q R S T U V W X Y Z



Ans: L

11. Man: Biography: : Nation:?

- a) History
- b) Geography
- c) People
- d) Leader

12. Consider green as red, red as blue, blue as pink what is the colour of the sky. Ans: Pink

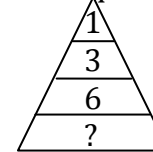
13. Consider: '+' as 'x' Solve 7 + 3 Ans: 21

14. Guess the world  +  = _____. Ans: Sunflower

15. I start with "T", ends, with "T", and within me is "T". What am I?

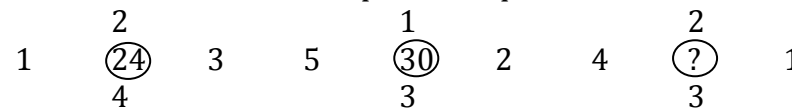
Ans: Tea Pot

16. What should replace the question mark in the given figure?



Ans: 9

17. Which number will replace the question mark



- a) 64
- b) 39
- c) 24
- d) 26

Ans: 24

18. Find the sum of place value of 7 and face value of 3 in 4578430.

Ans: 70030

19.

Write in 3 lines:

19. OWN

20. OWN